


Two-step problems

1 Annie has £15

Her mum gives her another £12

a) How much money does Annie have now?

Complete the bar model and the number sentence.




$$\square + \square = \square$$

b) Annie buys this teddy.



How much money does she have now?

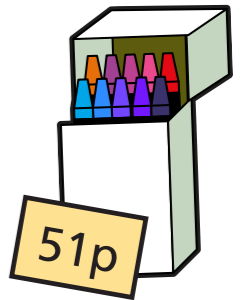
Complete the bar model and the number sentence.



$$\square - \square = \square$$

2 Tommy has 35p in one hand and 27p in the other hand.

a) How much money does Tommy have altogether?




Tommy buys this box of crayons.

b) How much money does he have now?



3 Aisha has a £20 note.

a) Aisha spends £7 on a cinema ticket.
How much change does she get?



b) Aisha's mum gives her another £3
How much money does Aisha have now?

4 A shop sells these items.



a) Ron buys a scarf and a box of marbles.
He pays with a £20 note.
How much change does he get?

b) Kim buys a book and a pair of headphones.
She pays with a £50 note.
How much change does she get?

c) Teddy buys a cap and a packet of balloons.
He pays with a £10 note.
How much change does he get?

5



Amir has £20
He wants to buy 2 balls.
Which balls can he buy?

How much change will he get?

Is there more than one answer?

