






































# Shape Times Shape



 x  x  = 	 x  = 
 x  = 	 x  = 
 x  = 	 x  = 
 x  = 	 x  = 
 x  = 	 x  = 
 x  = 	 x  = 

The coloured shapes stand for eleven of the numbers from 0 to 12.

Each shape is a different number.

**Can you work out what they are?**

Thousands more problems can be found on the NRICH Maths website:

<http://nrich.maths.org>