



MONEY

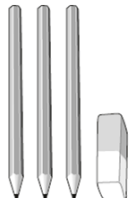
Help Code : 022

9

6 pencils cost £1.68



3 pencils and 1 rubber cost £1.09



What is the cost of 1 rubber?

Show your method

8

Olivia buys three packets of nuts.



She pays with a £2 coin.

This is her change.



What is the cost of one packet of nuts?

Show your method

20

Lara had some money.

She spent £1.25 on a drink.

She spent £1.60 on a sandwich.

She has **three-quarters** of her money left.

How much money did Lara have to start with?



Show your method

£

16

Large pizzas cost £8.50 each.

Small pizzas cost £6.75 each.

Five children together buy one large pizza and three small pizzas.

They share the cost equally.

How much does each child pay?



Show your method

£

19

One gram of gold costs £32.94

What is the cost of **half a kilogram** of gold?

Show your method

£

10

A bag of 5 lemons costs £1

A bag of 4 oranges costs £1.80



How much **more** does one orange cost than one lemon?

Show
your
method

£

Y6 SATS

Money £££ Problem\$ BOOSTER

Help Code : 022

2013A KS2 Q7



Megan and Chen are washing cars.

Megan gets £39 and Chen gets £55

They share what they get **equally** between them.

How much does each of them get?

Show your working

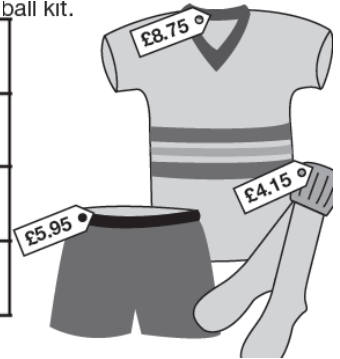
£

2013A KS2 Q8

The table shows the cost of a new football kit.

Item	Cost
Shirt	£8.75
Shorts (1 pair)	£5.95
Socks (1 pair)	£4.15

ball kit.



Altogether, how much does the complete football kit cost?



Show your working

£

2013A KS2 Q9

Here are some sentences about an amount of money.

Mark each sentence with a tick (✓) if it is correct.
Put a cross (✗) if it is not correct.

One has been done for you.



£1.03 can be made with exactly 1 coin.

£1.03 can be made with exactly 2 coins.

£1.03 can be made with exactly 3 coins.

£1.03 can be made with exactly 4 coins.

2012A KS2 Q2



Write these prices in order, starting with the **smallest**.

£20.50 £25 £2.50 £20.05

£ £ £ £

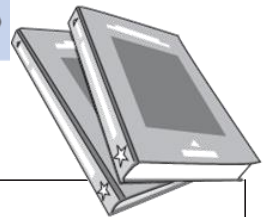
smallest

2013A KS2 Q16

Alfie buys **two** books, each at the same price.

He pays with a £10 note and gets £2.30 change.

What is the cost of **one** book?



Show your working

£

2010A KS2 Q1



Write these prices in order, starting with the **smallest**.

72p £2.70 £0.27 £7.20 £2.07

smallest

2012A KS2 Q12



These are the prices of cheese in a shop.



Cheddar cheese
82p for 100 grams

Edam cheese
66p for 100 grams

Cottage cheese
45p for 100 grams

Mina buys **200g** of Cheddar cheese and **150g** of Edam cheese.

How much does she pay altogether?

Show your working

£

Seb buys some cottage cheese for £1.35

How many grams of cottage cheese does he get?

g

Sarah buys a cheese salad and a yogurt.

Amy buys an egg salad.

How much **more** does Sarah pay than Amy?

Show your working. You may get a mark.

£

2011A KS2 Q12



Dev and Joe each buy a book.

Dev pays with a £5 note and gets £1.05 change.

Joe's book costs £7

How much **more** does Joe's book cost than Dev's book?

Show your working

£

2010A KS2 Q4

Liam, Sarah and Amy buy lunch at a salad bar.

salad bar			
Salads		Desserts	
cheese	£1.20	banana	25p
egg	90p	apple pie	50p
tuna	£1.60	yogurt	35p

Liam has £2.50 to spend.

He buys a tuna salad and an apple pie.

How much money has he got left?

p

2010A KS2 Q12

Big Wheel
£2.50
each ride

Rollercoaster
£1.50
each ride




Liam spends £14 altogether on the Big Wheel and the Rollercoaster.

He goes on the Big Wheel twice.


How many times does he go on the Rollercoaster?

Show your **working**. You may get a mark.



2009A KS2 Q11


Amir and Lara buy some fruit.



grapes
£2.50
for 1 kilogram



pineapples
£1.40
each



peaches
£1.99
for a box


Amir buys 2 pineapples and a box of peaches.

How much does he pay?

Lara buys half a kilogram of grapes and one pineapple.

How much change does she get from £5?

Show your **working**. You may get a mark.



£

2008A KS2 Q11

A shop sells scarves and hats.



scarves £7.95 each



hats

£4.50



£6.50



£3.99

Ben buys one of the scarves and the £4.50 hat.

How much change does he get from £20?

Show your **working**. You may get a mark.



£

2007A KS2 Q9

A torch costs £7.65


Kate buys a torch and **two** batteries.

She pays £8.75 altogether.

How much does **one** battery cost?



Show your **working**. You may get a mark.



£

2007A KS2 Q6

Here are three bags in a shop.



A
£11.50

B
£14.65

C
£16.50

How much does bag B cost to the nearest pound?



£

2005 KS2 Q7

A shop sells candles.



plain candles
35p each



star candles
60p each



stripe candles
85p each

Sapna buys 4 star candles and 2 stripe candles.

How much does she pay **altogether**?

Show your **working**. You may get a mark.

£

Special offer
Buy 10 candles and get 50p off.

Josh buys 10 plain candles in the special offer.

How much does he pay for the 10 candles?

£



2007A KS2 Q18

A shop sells notebooks and pens.

Hassan bought a **notebook** and a **pen**.
He paid **£1.10**

Kate bought a **notebook** and **2 pens**.
She paid **£1.45**

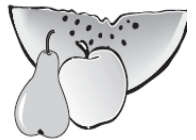


Calculate the cost of a **notebook**.

Show your **working**. You may get a mark.

£

2004A KS2 Q3



These are the prices of sandwiches, drinks and fruit.

Sandwiches	Drinks	Fruit
cheese £1.45	milk 55p	apple 15p
tuna £1.70	cola 45p	pear 20p
salad £1.20	juice 65p	melon 25p

Shereen buys a **tuna** sandwich, **milk** and a **pear**.

How much does she pay?

£

Mike has 80p to spend on a **fruit** and a **drink**.

What **two** things can he buy for exactly **80p**?

..... and




2004A KS2 Q10

A shop sells three types of sunglasses.



The shop also sells sun hats.



Ryan buys the **£4.69 sunglasses** and a **sun hat**.

How much change does he get from **£10**?

What is the **difference** in price between the **most** expensive and **least** expensive sunglasses?





Show your **working**. You may get a mark.

2003A KS2 Q8


Each of these bags contains **£1.60**

Each bag contains only one type of coin.



Complete this table to show how many coins are in each bag.

One has been done for you.



Type of coin	Number of coins
1p	160
10p	
20p	



2003A KS2 Q26



30 children are going on a trip.


It costs **£5** including lunch.

Some children take their own packed lunch.

They pay only **£3**

The 30 children pay a total of **£110**

How many children are taking their own packed lunch?



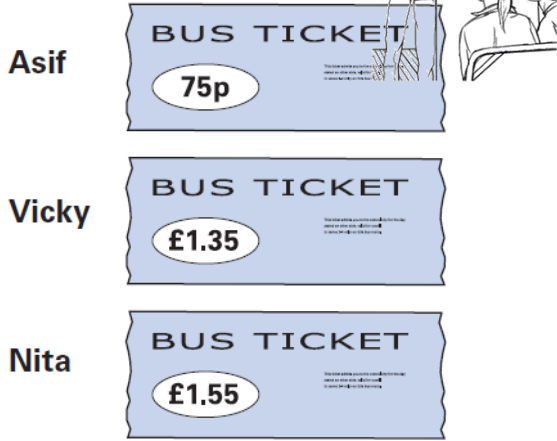
Show your **working**. You may get a mark.



2002A KS2 Q4

Asif, Vicky and Nita go to town by bus.

This is what they pay.



How much **more** does Nita pay than Asif?



Vicky then takes **another** bus from town to visit her auntie.

She pays **90p** on this bus.

How much has Vicky paid **altogether** for her two bus tickets?

2002A KS2 Q11

Mr Singh buys paving slabs to go around his pond.

PAVING SLABS

£1.95 each Square slabs
50cm by 50cm

£3.50 each Rectangular slabs
100cm by 50cm

50cm
100cm
Pond

He buys 4 rectangular slabs and 4 square slabs.

What is the total cost of the slabs he buys?

Show your **working**.
You may get a mark.

£

Mr Singh says,

'It would cost more to use square slabs all the way round.'


Explain why he is correct.

.....

.....

.....

2002A KS2 Q18



6 green apples for 75p

10 red apples for 90p

Jason bought some bags of green apples and some bags of red apples.

He spent **£4.20**

How many **bags** of each type of apple did he buy?

Show your **working**.
You may get a mark.

bags of green apples bags of red apples

Nika and Hassan bought some bags of apples.

Nika says,

'I bought more apples than Hassan, but I spent less money.'

Explain how this is possible.

.....

.....

.....



2001A KS2 Q7

Lewis makes a call from a telephone box.



He has £2 in coins.

He uses these five coins to make the call.

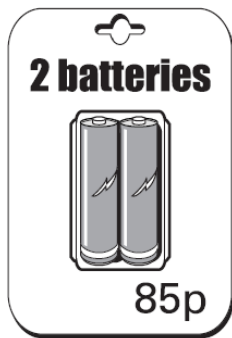



How much money has he got left from the £2?

Blank box for answer with a pencil icon above it.

2000A KS2 Q6

A shop sells batteries in packs of four and packs of two.



Simon and Nick want two batteries each. They buy a pack of four and share the cost equally.

How much does each pay?

Blank box for answer with a pencil icon and a speech bubble saying 'Show your working. You may get a mark.' to the left.



2001A KS2 Q14

Book Sale
Any 3 books for £14.50



Lee bought these three books in the sale for £14.50

How much money did he save altogether compared to the full price of the books?


Blank box for answer with a pencil icon and a speech bubble saying 'Show your working. You may get a mark.' to the left. A small box with '£' is on the right.



Mary buys 2 packs of two batteries. Hamid buys 1 pack of four.

How much more does Mary pay than Hamid?

Blank box for answer with a pencil icon and a speech bubble saying 'Show your working. You may get a mark.' to the left.



Peanuts cost **60p** for **100 grams**.

Raisins cost **80p** for **100 grams**.

Jack pays **£2** for a bag of raisins.

What is the cost of **350 grams** of peanuts?

How many **grams of raisins** does he get?

Show your **working**.
You may get a mark.

Show your **working**.
You may get a mark.