




SHAPE NAMES

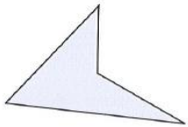
Help Code : 039

Match each shape to the correct name.

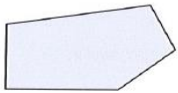
One has been done for you.



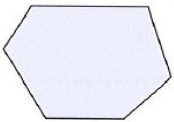
pentagon




triangle



octagon

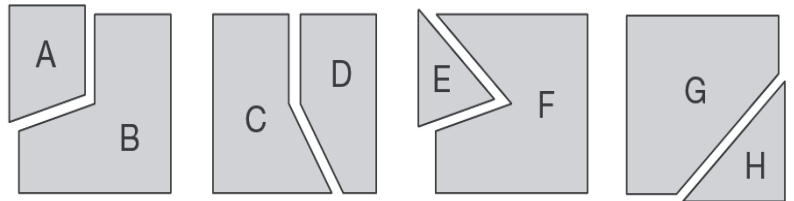


quadrilateral



hexagon

Each of these four squares has been cut into two new shapes.



Write the letters of all the new shapes that are **hexagons**.

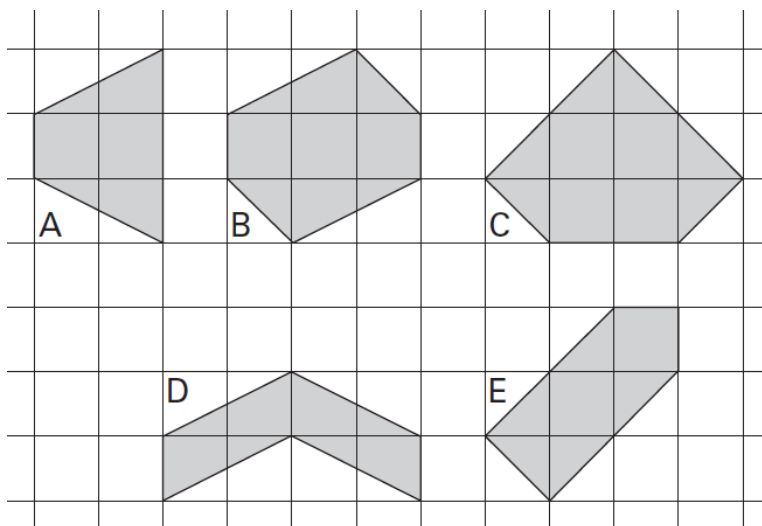


Write the letters of all the new shapes that are **pentagons**.



2005A KS2 Q6

Here are some shaded shapes on a square grid.



Write the letters of the **two** shapes which are hexagons.



..... and

Write the letters of the **two** shapes which have **right angles**.



..... and