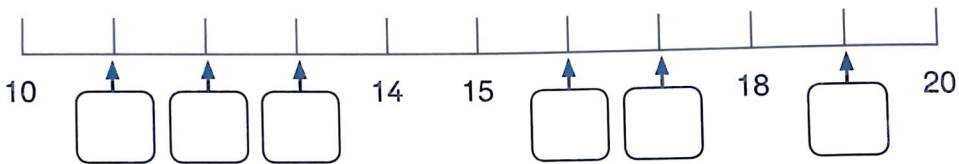


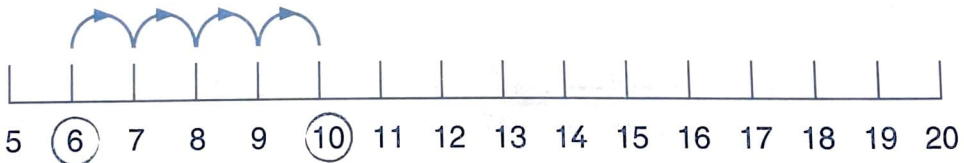
9a Adding and subtracting on a number line

1 Write the missing numbers on this number line.



2 Show the jumps for these. Write the answers.

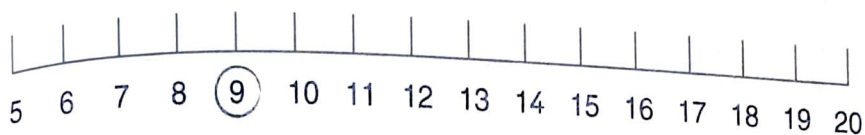
$$6 + 4 = \boxed{10}$$



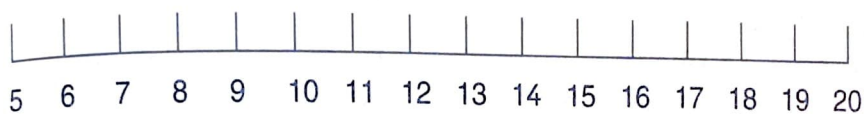
a $6 + 5 = \boxed{}$



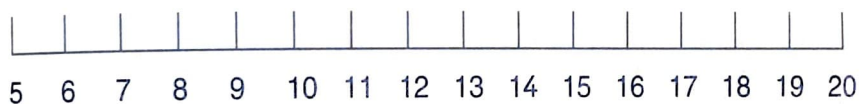
b $9 + 4 =$



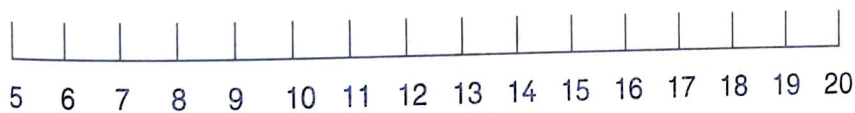
c $7 + 8 =$



d $9 + 7 =$



e $11 + 6 =$



f $7 + 12 =$

