


Wednesday 27th January 2021

WALT: Subtracting and adding on a number line.

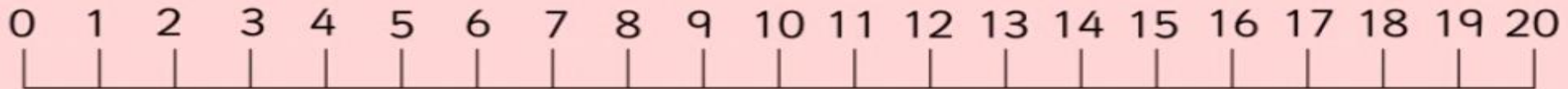


Get a pencil
and paper
ready.



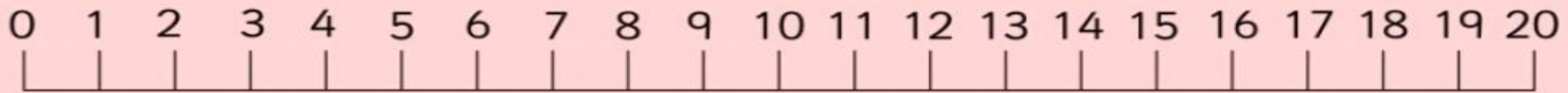
$$19 - 1 =$$

18



$$13 - 3 =$$

10



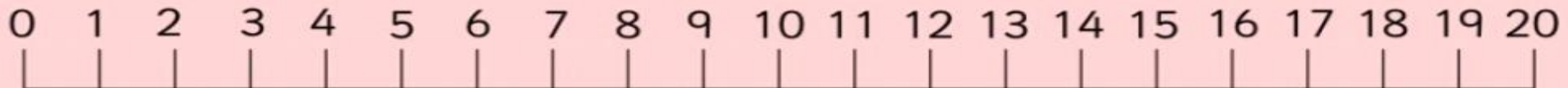
$$12 - 2 =$$

10



$$6 - 3 =$$

3



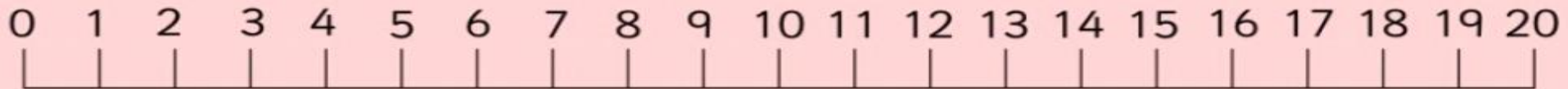
$$18 - 4 =$$

14



$$7 - 3 =$$

4



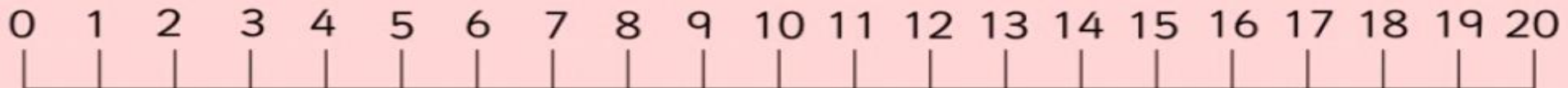
$$17 - 6 =$$

11



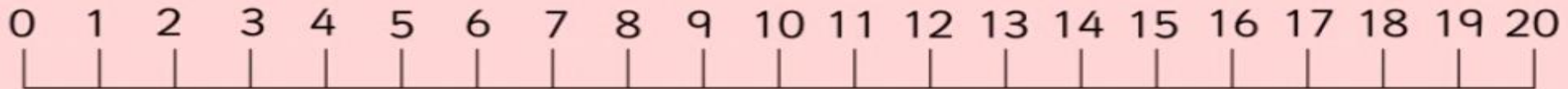
$$15 + 0 =$$

15



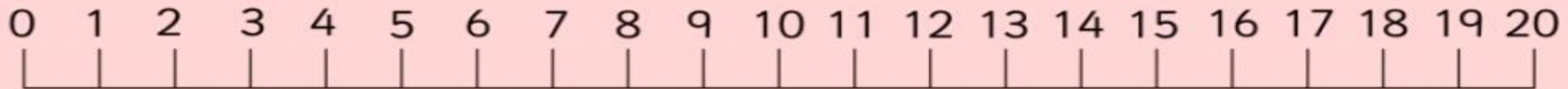
$$12 + 4 =$$

16



$$18 - 7 =$$

11



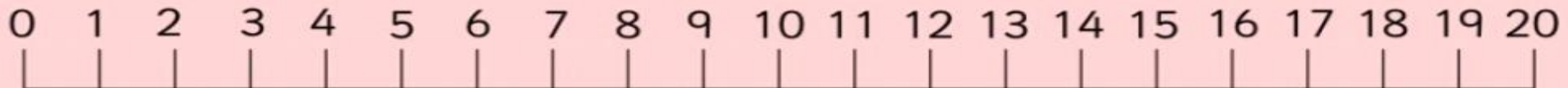
$$15 + 4 =$$

19



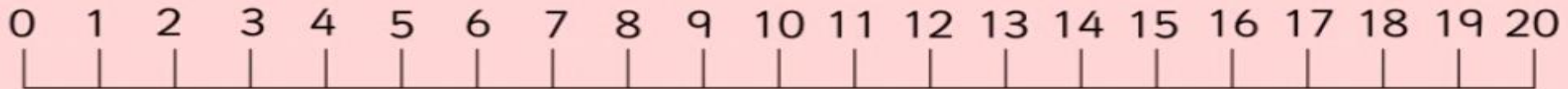
$$20 - 6 =$$

14



$$20 - 9 =$$

11



$$12 + 2 =$$

14



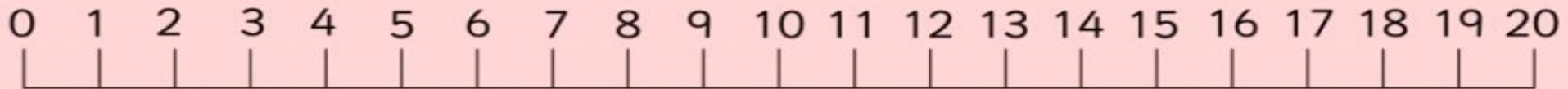
$$12 + 4 =$$

16



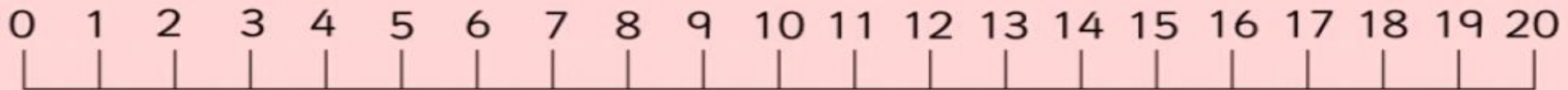
$$18 - 2 =$$

16



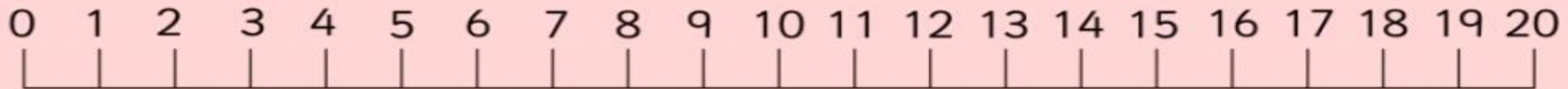
$$14 + 6 =$$

20



$$15 - 1 =$$

14



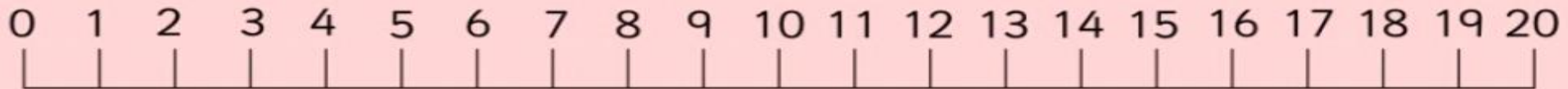
$$19 + 1 =$$

20



$$19 - 4 =$$

15



$$13 + 4 =$$

17



$$10 - 7 =$$

3



$$5 - 3 =$$

2



Your task:

Challenge 1:

Complete the addition and subtraction questions opposite in your maths book using a numberline.

$6 + 6 =$	$8 - 6 =$	$9 - 3 =$	$13 - 4 =$	$4 - 1 =$
$14 + 5 =$	$2 + 17 =$	$7 - 4 =$	$4 + 9 =$	$4 - 2 =$
$9 - 7 =$	$3 + 9 =$	$15 - 1 =$	$20 - 10 =$	$10 - 5 =$
$2 + 11 =$	$3 + 1 =$	$14 - 7 =$	$17 + 2 =$	$2 + 3 =$
$2 + 15 =$	$3 - 2 =$	$9 + 3 =$	$6 + 4 =$	$15 - 6 =$
$7 - 3 =$	$11 + 5 =$	$8 - 5 =$	$7 + 8 =$	$4 + 6 =$
$10 + 10 =$	$18 - 4 =$	$3 + 4 =$	$20 - 19 =$	$4 + 9 =$
$8 - 2 =$	$10 + 0 =$	$8 + 8 =$	$14 + 2 =$	$7 - 2 =$
$11 + 1 =$	$13 - 5 =$	$17 - 2 =$	$9 - 4 =$	$19 + 1 =$
$14 - 1 =$	$12 - 9 =$	$3 + 7 =$	$5 + 5 =$	$15 - 9 =$


Your task:

Challenge : solve the word problems below using a numberline.



If you had 20 jelly beans and you have eaten 6 of them, how many would you have left?

If you had 20 plums and you use 13 to make jam, how many would you have left?



Addition and Subtraction to 100 Word Problems

4. If you invite 53 people to a party and 24 of them say they can't come, how many people will be at the party?



Addition and Subtraction to 100 Word Problems

10. If you have 28 marbles and win another 29, how many marbles would you have?

