


Tuesday 26th January 2021

WALT: Subtraction on a number line
within 20.



Get a pencil
and paper
ready.



$$19 - 1 =$$

18



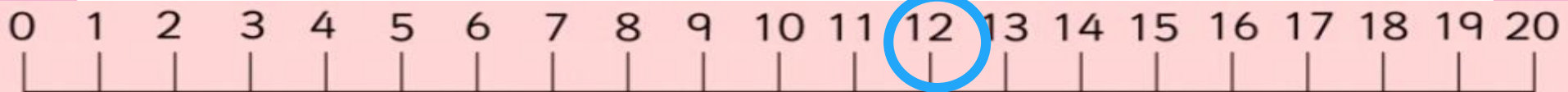
$$5 - 4 =$$

1



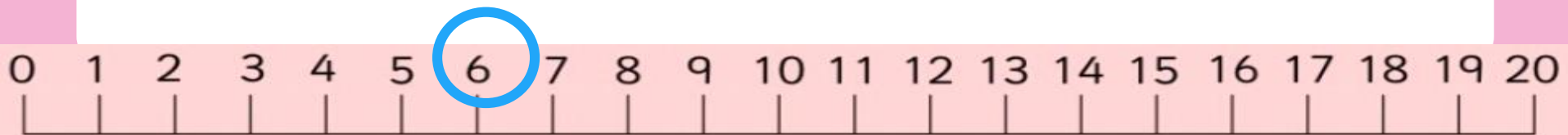
$$12 - 2 =$$

10



$$6 - 3 =$$

3



$$15 - 0 =$$

15



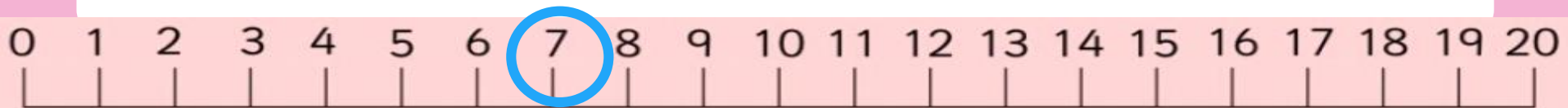
$$18 - 4 =$$

14



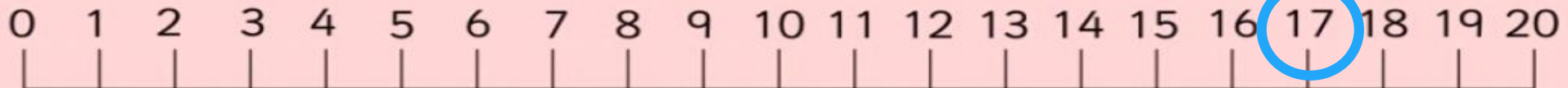
$$7 - 3 =$$

4



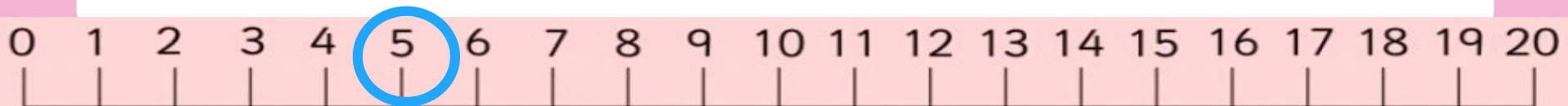
$$17 - 6 =$$

11



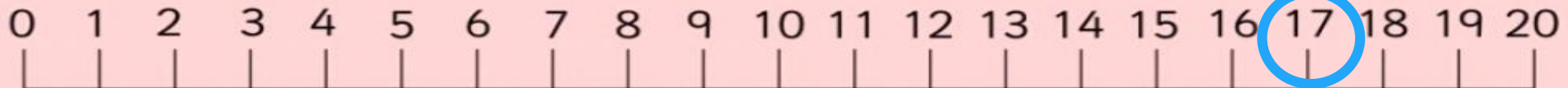
$$5 - 5 =$$

0



$$17 - 4 =$$

13



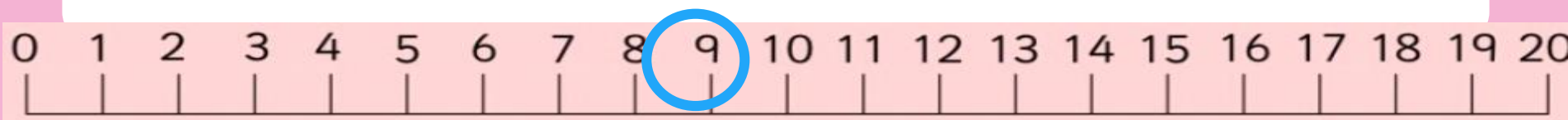
$$10 - 4 =$$

6



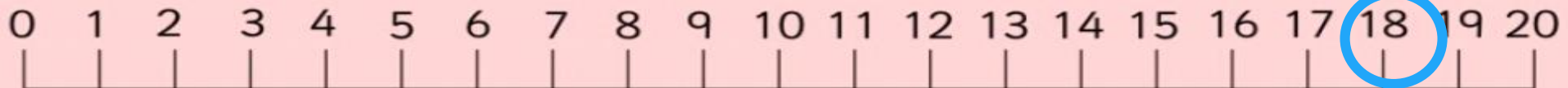
$$9 - 6 =$$

3



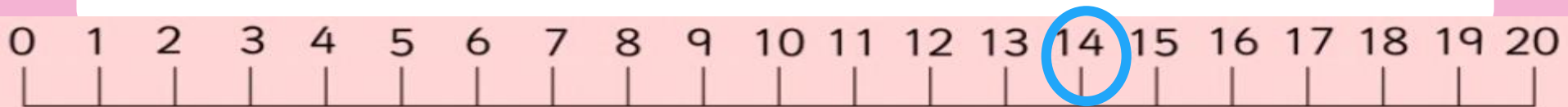
$$18 - 7 =$$

11



$$14 - 4 =$$

10



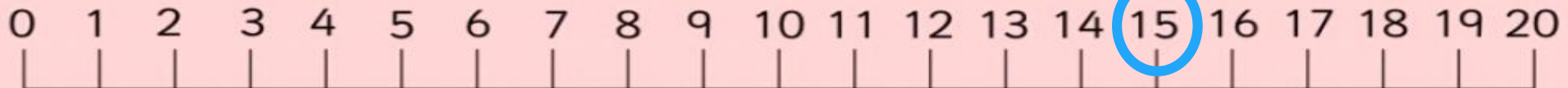
$$18 - 2 =$$

16



$$15 - 1 =$$

14



$$19 - 4 =$$

15

0 1 2 3 4 5 6 7 8 9 10 11 12 13 14 15 16 17 18 19 20

$$10 - 7 =$$

3



Your task today:








Challenge 1:

Complete pages **54** and **55 question 3** of your workbook.

Challenge 2:

Complete the questions on the PDF document Challenge 2 on today's remote learning page.

Challenge 2: Answer the following subtraction questions.

$14 - 6 = 8$	
$17 - 5 =$	
$20 - 9 =$	
$12 - 7 =$	
$19 - 10 =$	
$11 - 4 =$	
$15 - 11 =$	
$16 - 3 =$	