


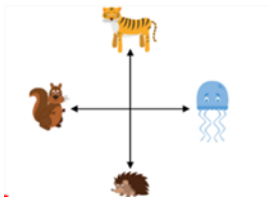
Mental Maths Mondays! – 8th February 2021



1. Write the number four thousand and three in digits.
2. What is $7 \times 6 + 16 =$
3. What do I add to 45 to make 100?
4. Order these lengths from the shortest to the longest- 15cm, 160mm, 1m56cm, 132cm
5. How many right angles are there in a $\frac{3}{4}$ turn?
6. What is 23×10 ?

7.  What type of angle is this? Is it smaller or greater than a right angle?

8.



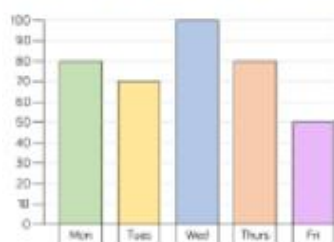
Describe the turn from the jellyfish to the tiger.



9.

What time will the clock show in 15 minutes?

The bar chart shows how many children attend after school clubs.



Which day is the most popular?

Which day is the least popular?

What is the difference between the number of children attending on Tuesday and on Thursday?

What information is missing from the bar chart?

10.