

Friday 5th
February 2021

Home Learning

There is **NO**
elevator to
SUCCESS.

You have
to take the
STAIRS.

Today's New learning



MORNING TASK-
PROBLEM OF THE
DAY



LIVE SESSION
(HOPEFULLY)



ENGLISH- OAK
ACADEMY



RE- ART TASK/
CREATIVE TASK



LEARNING LOG/
FREE TIME

Problems of the Day 2020

Day
4

1 What are the missing digits?

$$\begin{array}{|c|c|} \hline 3 & \square \\ \hline \end{array} + \begin{array}{|c|c|} \hline \square & 5 \\ \hline \end{array} = \begin{array}{|c|c|c|} \hline 1 & 1 & 1 \\ \hline \end{array}$$

2 Annie and Ron each think of a number.

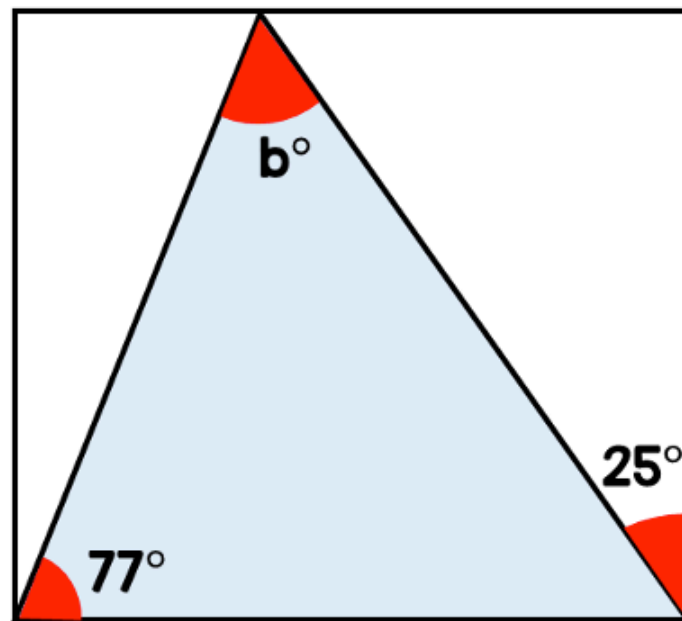
I'm thinking of the
number 6



The product of their numbers is 762

Work out Ron's number.

3 Find the size of angle b.



1 What are the missing digits?

$$\begin{array}{|c|c|} \hline 3 & 6 \\ \hline \end{array} + \begin{array}{|c|c|} \hline 7 & 5 \\ \hline \end{array} = \begin{array}{|c|c|c|} \hline | & | & | \\ \hline \end{array}$$

2 Annie and Ron each think of a number.

I'm thinking of the
number 6

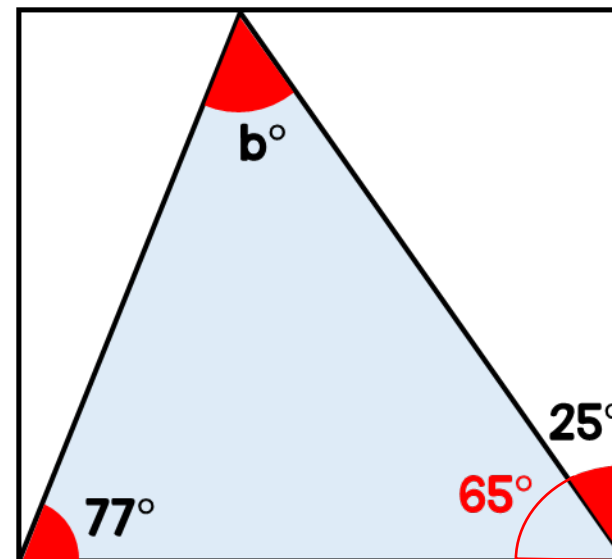


The product of their numbers is 762

Work out Ron's number.

$$762 \div 6 = 127$$

3 Find the size of angle b.



$$90 - 25 = 65$$

$$65 + 77 = 142$$

$$180 - 142 = 38$$

$$b = 38^\circ$$

Live chat Rules

We follow the school rules

Think:

- Is it Kind?
- Is it caring?
- Is it my best?
- Just because we are online doesn't mean that our rules change!

Live session



Write down one word to describe your mood



Write it big on a piece of scrap paper



Then on the back write down one way you have come up with that cheers you up! BE honest!

Spelling test time



Make sure you have a clean sheet of paper ready



At the end we will go through them and check them



You can keep your score a secret (or show us on your camera if you want)

Ninja Maths

Do not start yet!
Wait until we are all ready.

I will go through the
answers after!

WEEK 8 SESSION 1 - Answer as many questions as you can in 5 mins


MENTAL STRATEGIES -
do these in your head


Q	Question	Answer
1	$8 + 2$	
2	What is double 4?	
3	What is half of 33?	
4	$174 + 70$	
5	$57 + 58$	
6	$68 + 11 = 68 + 2 + \square$	
7	$5 + 822$	
8	$79 + 52 = 79 + 50 + \square$	
9	$152 + 10$	
10	$44 - 10$	
Total out of 10		

TIMESTABLES -
do these in your head

Q	Question	Answer
1	$6 \times 7 = \square$	
2	$2 \div 2 = \square$	
3	$10 \times \square = 90$	
4	$2 \div \square = 1$	
5	$4 \times 5 = \square$	
6	$45 \div 9 = \square$	
7	$\square \times 6 = 42$	
8	$\square \div 2 = 3$	
9	$9 \times 1 = \square$	
10	$7 \div 7 = \square$	
Total out of 10		

KEY SKILLS - you may use written calculations for these questions

Q	Question	Answer
1	List the first 4 multiples of 5	
2	What is 65% of £100?	
3	$4890 \div 5$	
4	$8 + 4 \div 1$	
5	$5.4 \div 2$	
6	100×0.97	
7	$26.93 - 4.83$	
8	Simplify $3/18$	
9	$(-7) + 2$	
10	<div>Value of the dot?</div> 	
Total out of 10		



What's your **NINJA** Score?
Fill in your scores in the boxes and calculate it now!

MENTAL STRATEGIES:

TIMESTABLES:

KEY SKILLS: +

MY **NINJA** BELT:

NINJA SCORE:



Week 8 Session 1

Mental Strategies Answers

Q	Question	Answer
1	$8 + 2$	10
2	What is double 4?	8
3	What is half of 33?	16.5
4	$174 + 70$	244
5	$57 + 58$	115
6	$68 + 11 = 68 + 2 + \square$	9
7	$5 + 822$	827
8	$79 + 52 = 79 + 50 + \square$	2
9	$152 + 10$	162
10	$44 - 10$	34



Week 8 Session 1

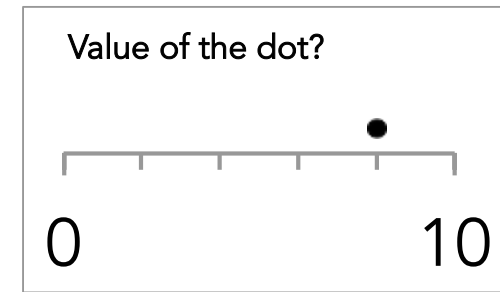
Timestables Answers

Q	Question	Answer
1	$6 \times 7 = \square$	42
2	$2 \div 2 = \square$	1
3	$10 \times \square = 90$	9
4	$2 \div \square = 1$	2
5	$4 \times 5 = \square$	20
6	$45 \div 9 = \square$	5
7	$\square \times 6 = 42$	7
8	$\square \div 2 = 3$	6
9	$9 \times 1 = \square$	9
10	$7 \div 7 = \square$	1



Week 8 Session 1


Key Skills Answers



Q	Question	Answer
1	List the first 4 multiples of 5	5, 10, 15, 20
2	What is 65% of £100?	£65
3	$4890 \div 5$	978
4	$8 + 4 \div 1$	12
5	$5.4 \div 2$	2.7
6	100×0.97	97
7	$26.93 - 4.83$	22.1
8	Simplify $\frac{3}{18}$	$\frac{1}{6}$
9	$(-7) + 2$	-5
10	See number line	8

Star of the week

Home and School learner... who will it be?



English

Friday 5th February 2021

Can I edit and improve my writing?

- Today's Literacy should only take around 15 minutes. Follow the video and edit and improve your own writing. (I have made this shorter due to our live session and that RE may take a while to do well!)
- Follow the link here: [Click here](#)

RE- I will explain this task when we are LIVE

- Just incase it all goes wrong-
 - Select either Matthew, Mark, Luke or John's version of the story of the feeding of the 5000.
 - Copy one or two important lines from the reading from the Gospel and decorate it to tell the full story.
 - In class we talked about the story being a metaphor for Jesus sharing his love for others. Think about sharing, loving, kindness etc
 - If you need the verses then use the website Biblegateway.com

Friday Afternoon

Add what you have learnt into your learning log

- What have you learnt?
- What have you mastered?
- What do you need more help with?

Then relax, go for a walk, read a book, make something, bake something, paint something, teach someone... enjoy your weekend!