

Friday 5th March 2021

Home Learning– Final Live session at 9.30!

Today's New Learning

- Morning Task– Among US
- Morning Challenge
- LIVE– Spelling Test
- LIVE– Ninja Maths
- LIVE– Wonder (To be completed independently)
- FREE AFTERNOON!



Find the mistake Among Us!

Mr Draper thinks that to find the area you must times the length x the width x depth. Explain if he is correct?



Find the mistake Among Us!

Mr Draper thinks that to find the area of a parallelogram is length x height x diagonal line? Explain if he is correct?



Find the mistake Among Us!

Mr Draper thinks that to find the area of a triangle it is length x width divided by 2? Explain if he is correct.



Find the mistake Among Us!

Mr Draper thinks that everyone is super excited to get back into his class and we will be working incredibly hard whilst making memories?

March 5th.jpg

Good morning! – It's 5th March

Leo's word of the day:

conceal

To prevent something from being seen or known.

During the court case, the criminal's lawyer **concealed** a large amount of important evidence.

(Could you alter the suffix?)


Today in history:



In 1982, the Soviet probe Venera 14 lands on Venus.



Country of the day

 **Uzbekistan**

Capital city: Tashkent

Continent: Asia



Which countries share borders with Uzbekistan?

Today's challenges

during the 2017/18 season, Ada scored 24 goals. Her team scored 120 goals in total.



What percentage and fraction of the team's total goals did she score?



Use the word of the day in a sentence.



Do something kind for someone!



Can you spot any mistakes?

Quick Maths

$$66.64 + 12.45$$

$$3,542 - 2,435$$


$$12 \times 14$$

$$63,987 \div 6$$

Spelling Test

Q	Question	Answer
1	$3 + 7$	
2	What is double 2?	
3	What is half of 46?	
4	$28 + 30$	
5	$27 + 24$	
6	$79 \div 6 = 79 \div 1 + \square$	
7	$2 + 181$	
8	$31 + 72 = 30 + 70 + \square$	
9	$16 + 10$	
10	$132 - 80$	
Total out of 10		

Q	Question	Answer
1	$5 \times 3 = \square$	
2	$56 \div 8 = \square$	
3	$7 \times \square = 49$	
4	$28 \div \square = 7$	
5	$4 \times 7 = \square$	
6	$24 \div 4 = \square$	
7	$\square \times 7 = 7$	
8	$\square \div 8 = 8$	
9	$1 \times 3 = \square$	
10	$54 \div 9 = \square$	
Total out of 10		

Q	Question	Answer
1	List the first 4 multiples of 11	
2	What is 65% of £170?	
3	$1395 \div 9$	
4	$37 - 4 \times 2$	
5	$562.26 \div 6$	
6	100×1.66	
7	$16 - 6.8$	
8	Write $24/64$ in its simplest form	
9	Difference between -7 and 4	
10	<div style="border: 1px solid black; padding: 5px; margin: 5px;"> Value of the dot?  </div>	
Total out of 10		



Week 8 Session 4

Mental Strategies Answers

Q	Question	Answer
1	$3 + 7$	10
2	What is double 2?	4
3	What is half of 46?	23
4	$28 + 30$	58
5	$27 + 24$	51
6	$79 + 6 = 79 + 1 + \square$	5
7	$2 + 181$	183
8	$31 + 72 = 30 + 70 + \square$	3
9	$16 + 10$	26
10	$132 - 80$	52



Week 8 Session 4

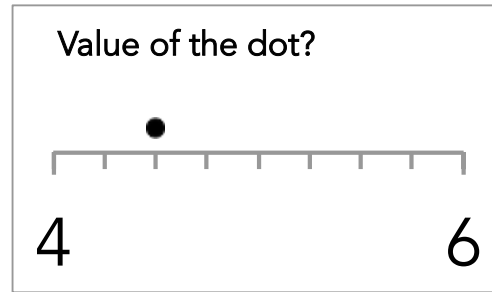
Timestables Answers

Q	Question	Answer
1	$5 \times 3 = \square$	15
2	$56 \div 8 = \square$	7
3	$7 \times \square = 49$	7
4	$28 \div \square = 7$	4
5	$4 \times 7 = \square$	28
6	$24 \div 4 = \square$	6
7	$\square \times 7 = 7$	1
8	$\square \div 8 = 8$	64
9	$1 \times 3 = \square$	3
10	$54 \div 9 = \square$	6



Week 8 Session 4

Key Skills Answers



Q	Question	Answer
1	List the first 4 multiples of 11	11, 22, 33, 44
2	What is 65% of £170?	£110.50
3	$1395 \div 9$	155
4	$37 - 4 \times 2$	29
5	$562.26 \div 6$	93.71
6	100×1.66	166
7	$16 - 6.8$	9.2
8	Write $24/64$ in its simplest form	$3/8$
9	Difference between -7 and 4	11
10	See number line	4.5

STARS OF THE WEEK!



THE FINAL HOME LEARNER.....

**RETURN TO
SCHOOL CHAT!**



You can't blend in
when you were born to stand out



R. J. Palacio

Friday 5th March 2021

Can I evaluate a key chapter
of our story and make my
own judgements?

Costumes and The Bleeding Scream

Vocabulary	What does it mean to 'ditch' someone?
Infer	<p>Find and copy a sentence which shows August wishes Halloween was longer than one day.</p> <p>Find and copy a sentence which shows August was feeling happy walking through the halls.</p> <p>How do our opinions of Jack Will change in this chapter?</p>
Predict	Predict what August will do next at school.
Explain	<p>Explain why the author lists all of August's different Halloween outfits.</p> <p>Explain why August loves Halloween so much.</p>
Retrieve	<p>What mask did August used to wear when he was young?</p> <p>Why did he have to stop wearing the mask?</p> <p>Where did Mom think the mask had gone?</p> <p>What was August's third Halloween outfit?</p> <p>Who was going to dress up as Hermione from Harry Potter?</p> <p>What did August wear for Halloween?</p> <p>What was August looking for as he was crying?</p>
Summarise	Use one word to describe how August felt when he overheard Julian and Jack Will. Then, explain why you chose this word.

FREE AFTERNOON

- Please go and make the most of this afternoon.
- Hopefully, this will be your last afternoon of home learning so:
 - Go and spend some time with a sibling
 - Teach someone something in your house
 - Bake something, paint something, draw something, make something, build something!
 - Relax and do something you enjoy doing e.g. sing, dance, relax, ring a friend
 - Spend time with your family– they are precious (have a duvet afternoon!)
 - RECHARGE YOUR BATTERIES READY FOR MONDAY! BRING THE BEST VERSION OF YOU!

REMEMBER to thank your parents for helping you with your home learning. I know it will have been tricky at times but honestly, they will have been trying their best!

Well done everyone!