

Monday 1<sup>st</sup>  
March 2021

Home learning!



*Hello March!*

# Today's New Learning

- Morning task- Handwriting/ Spellings
- While you wait- Morning Challenge
- Live- Literacy Lesson- Wonder
- Live- Introduction into volume challenges!
- Guided Reading- Video Guided session.
- French- My Family Session 2

Spellings/ Handwriting- Write these out in your neatest handwriting and then use our spelling techniques!

This week= -ation words

sensation  
information  
adoration  
preparation  
admiration

obligation  
infiltration  
frustration  
navigation  
imitation


Good morning! – It's 1st March

leo's word of the day:

**jostle**

To push, elbow or bump against someone roughly.  
After thirty minutes of the concert, there was a lot of **jostling** in the crowd and the police were called.

(Think about changing the suffix!)



Today in history:

In 1992, Bosnia & Herzegovina declares it's independence from the Socialist Federal Republic of Yugoslavia.

Quick Maths

$$37,655 + 12.9$$

$$4,592 - 3,258$$

$$8 \times 22.7$$

$$180 \div 15$$

Country of the day



Ecuador

Capital City: Quito



What's my continent?



Today's challenges

If a tunnel to the centre of the earth is 3,959.6 miles, what would the distance of a tunnel running in a straight line from one point of the earth to another, directly through the centre point, be?



Use Leo's word of the day in a new sentence.



Can you spot the mistakes?

English:

Monday 1<sup>st</sup> March 2021

Can I describe August from several perspectives?

- While you wait-
  - Who is involved in his life?
  - Make a quick list of everyone that he is surrounded by.
- Think- Who may treat him differently?



Via is beautiful in appearance and manner. She has the most stunning eyes which, when you know her, give her thoughts away completely. She has thick, brown, wavy hair which frames her oval, flawless face and always smells like oranges. Although I doubt that she would ever admit it, Via is extraordinary. She is courageous, loyal, intelligent, funny and giving but none of this compares to her empathy. I have never known, and doubt I will ever meet, anyone who has such a depth of understanding and feeling for the needs of others. Whether or not they realise it, Via holds her lovely family together to the detriment of her own needs.



Description  
of Via... from  
who?

We will  
dissect this  
together!



Who will Auggie meet/ be  
surrounded by?

Let's share your ideas!

Task- Draw something like this out in your book. For each person write about Auggie. Think about how each character will see Auggie in a different way.

Mr Pullman

Mrs Pullman

Via

Mr Browne

Jack

Julien

?



# Literacy Challenge

- Write a description of Auggie from another perspective but do not tell me who you have written if from.
- My job is to guess who said it.... If your description is good/ clear then I will get it!



1/03/2021

Can I solve volume problems?

While you wait...

What is the formula for volume?

Can you think of the other vocabulary that I used last week?

# What facts do we know about numbers?

- Think about odd and even
- Think about what happens when we times or divide them
- Think about what you know about shapes (2D and 3D)

# Trail and improvement

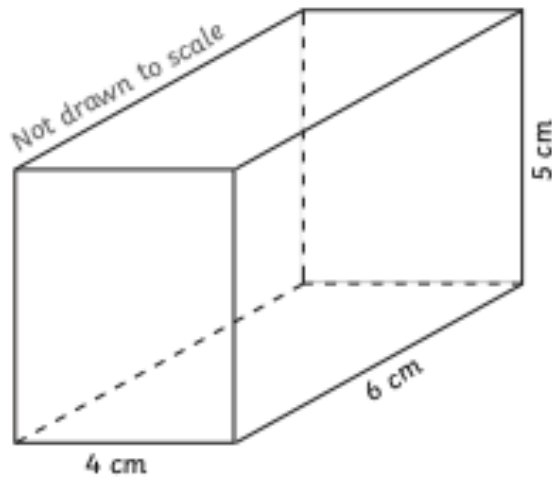
- Somethings in maths require trial and improvement.
- Sometimes you won't find the answer straight away
- Today's challenges are tricky but only because you need to think logically.
- Do not give up, be strong- they won't be easy straight away.
- Remember- Big problems are just a series of small problems put together, break them down step by step!

length  $\times$  width  $\times$  height

to calculate the volume of a cuboid.



- 1) Two children are discussing the best way to find the volume of this cuboid.



Amrit says - To work out the volume I made sure to use the formula length  $\times$  width  $\times$  height in order.

$$4 \times 6 = 24$$

$$24 \times 5 = 120\text{cm}^3$$



Amrit

Noah says - I just multiplied the measurements in the order I found the easiest and quickest to work out.

$$4 \times 5 = 20$$

$$20 \times 6 = 120\text{cm}^3$$



Noah

Will Noah's method always work? Explain your answer fully.

---

---

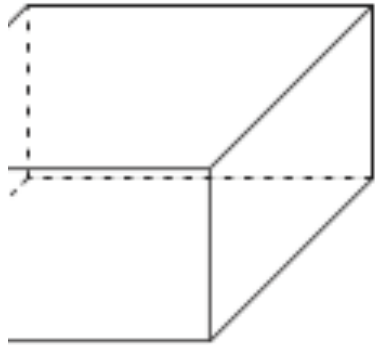
---

## Challenge 1



ures the sides of this cuboid in order to find the volume.

Not drawn to scale



All of the sides are even numbers.  
I calculated that the volume of my shape  
was  $17\text{cm}^3$ .



I don't think Ada's answer can be correct  
if all the sides were even number.



ree with Chelsea? Explain your reasoning.

---

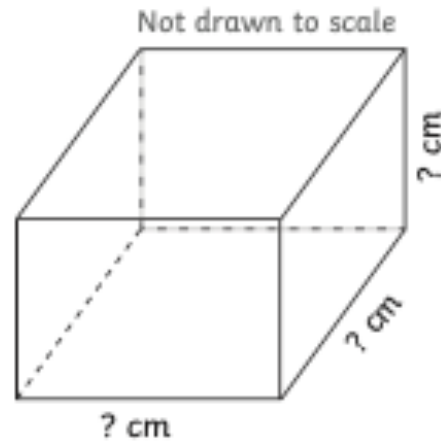
---

---

---

## Challenge 2

- 1) A cuboid has sides that are whole numbers. No side is smaller than 3cm or longer than 10cm. It has a volume between  $70\text{cm}^3$  and  $75\text{cm}^3$ .



Find three sets of different dimensions for the cuboid.

(Rearranging the order of the measurements is not accepted as a different answer.)

length = \_\_\_\_cm

length = \_\_\_\_cm

length = \_\_\_\_cm

width = \_\_\_\_cm

width = \_\_\_\_cm

width = \_\_\_\_cm

height = \_\_\_\_cm

height = \_\_\_\_cm

height = \_\_\_\_cm

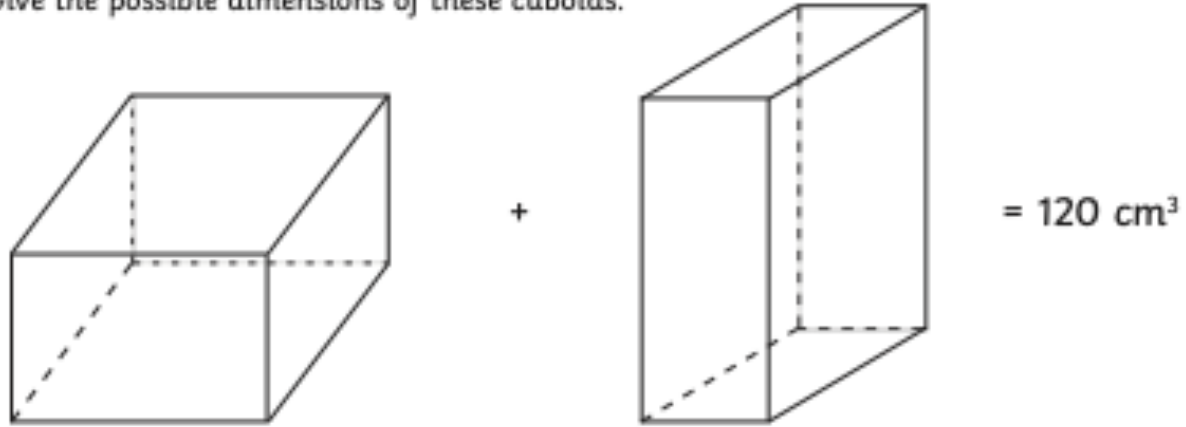
volume = \_\_\_\_cm

volume = \_\_\_\_cm

volume = \_\_\_\_cm

## Challenge 3

- 2) When added together, two different cuboids have a volume equal to  $120\text{cm}^3$ .  
Give the possible dimensions of these cuboids.



Find 5 different answers.

(Rearranging the order of the measurements is not accepted as a different answer.)

---

---

## Challenge 4

# Guided Reading

Monday 1<sup>st</sup> March 2021

Can I answer reading comprehension questions including sequencing the key events?

- **Flying Dragons of the Jungle -**  
<https://www.youtube.com/watch?v=rBVgbxTkEuo>

# Guided reading- The questions

- What is the name of the type of lizard featured in this clip?
- The large male is described as the tree's 'owner.' What does this mean?
- What do Draco Lizards not do?
- What is the purpose of the 'flag' under the Draco Lizard's chin?
- Sir David Attenborough explains, "trespassers won't be tolerated." What do the following words mean?
- Trespassers –
- Tolerated –
- As well as being intimidating, what is the owner prepared to do?
- Sir David Attenborough says the animal arrives at a 'Dead End.' What does this phrase mean?
- Pause at 57 seconds – Predict what will happen next.
- Where is the only place in which you can find lizards, "that soar like dragons"?
- How far can the Draco Lizard travel in a single leap?
- Sir David Attenborough uses two adjectives to describe the lizard's way of moving through the jungle. What are they?
- What 2 things are the lizard hoping the new tree he lands on will have?
- Pick 3 words to summarise this clip. Explain each choice.




# Guided reading Challenge- Ordering the events

- Order the following events from the clip from 1 – 5. One has been done for you.
- The lizard lands safely on a new tree. —
- The ‘owner’ uses a flag on his chin to intimidate his rival. —
- The lizards prepare to battle. —
- The lizard leaps from the tree. —
- The trespasser runs away. 3

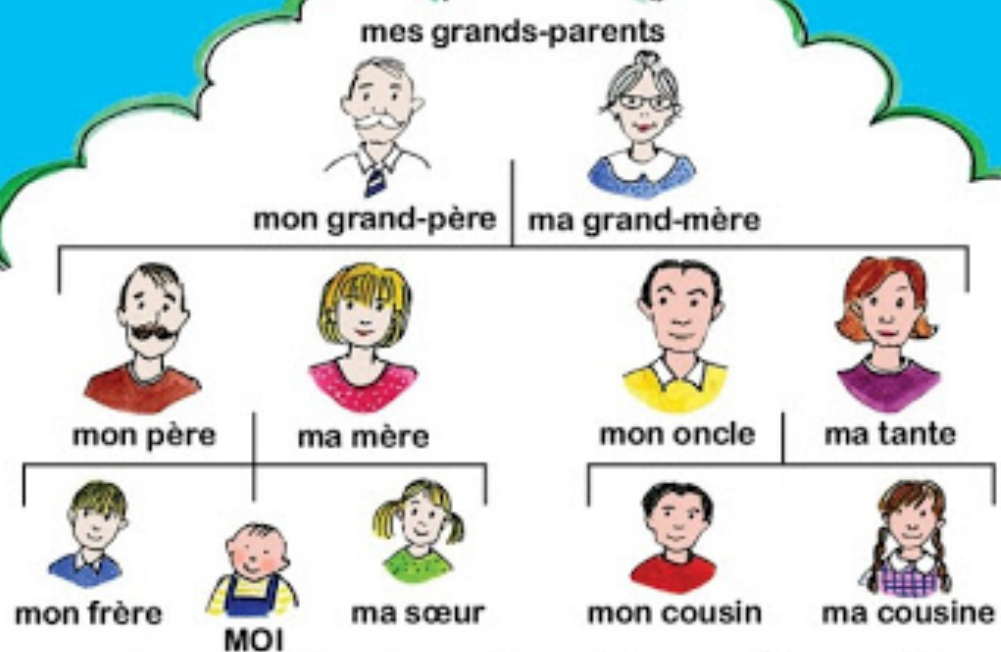
# Bonjour!-

Second lesson on Ma Famille!



Je parle  
français

# Ma Famille



Let's recap

## Aim

- I can develop strategies for remembering new language.
- I can match subject and verb correctly when talking about pets.

## Success Criteria


- I can use gestures to help me remember pets vocabulary.
- I can link sounds and meanings.
- I can make sentences about myself using 'je'.
- I can use 'tu' to ask questions about a partner.

# Our Pets







# Introduction




Qu'est-ce que  
c'est?

C'est un lapin!

 est-ce que c'est ?





C'est...  
un chien.

 est-ce que c'est ?




C'est...  
un chat.

 est-ce que c'est ?




C'est...  
une tortue.


 est-ce que c'est ?




C'est...  
un hamster.



 est-ce que c'est ?




C'est...  
un poisson.

 est-ce que c'est ?





C'est...  
un oiseau.

 est-ce que c'est ?





C'est...  
une souris.

 est-ce que c'est ?





C'est...  
un cochon d'inde.

 est-ce que c'est ?



C'est...  
un lapin.

 est-ce que c'est ?



C'est...  
un serpent.



# La grammaire

(Grammar Point)





# La grammaire

(Grammar Point)








# La grammaire

(Grammar Point)



Task- Practice  
saying the words  
first, use google  
translate if you  
need too!

- Then I want to you make some cards (use scrap paper)
- Write down all the animals in English (one animal per card)
- Write down all the animals in French (one animal per card)
- Then find someone in your house to play pairs with!
- Have fun.... Send me a video if you wish!