

Homework Due 24th March

Spellings:

Unless told otherwise, please practice all 10 spellings. The 5 highlighted are for some children as a focus.

criticise

advertise

capitalise

finalise

equalise

fertilise

terrorise

socialise

visualise

classify

Times Tables:

For the 2 weeks to practice:

11 and 12 times tables

English- SPAG WORK

1. Insert appropriate adjectives from below to complete the sentences.

A. The _____, _____ scientist experimented with a range of different investigations.

B. The _____, _____ clown arrived with colourful balloons.



interesting

silly

cheerful

young

funny

promising



VF
HW/Ext

2. Tick the pair(s) of adjectives that could replace the adjectives in the sentence below without changing the meaning.

The fast, athletic sprinter raced over the finish line.

rapid, unfit

slow, active

quick, sporty

sprightly, young



VF
HW/Ext

3. True or false? The noun phrase in the sentence below offers important information about the subject.

The well-prepared, smart business man entered the boardroom for a meeting.



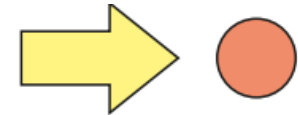
Explain your answer.



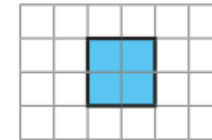
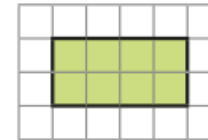
AR
HW/Ext

Maths- area of rectangles

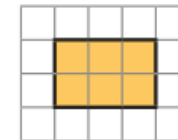
- Which shape has the greater area?
How do you know?



- On the grid, the area of each square is 1 cm²
Find the area of each shape.



- Complete the sentences to find the area of the rectangle.



- There are _____ rows of _____ squares.

There are _____ squares altogether.

$$_____ \times _____ = _____$$

- There are _____ columns of _____ squares.

There are _____ squares altogether.

$$_____ \times _____ = _____$$

What do you notice?

Please choose one of the pieces of topic homework and complete it in your book.