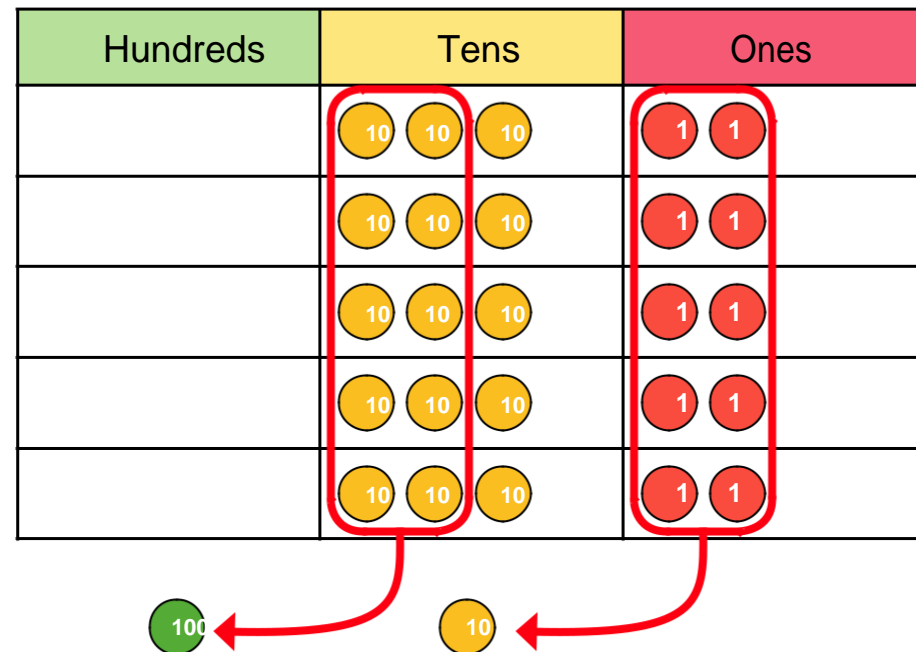


# Sheet 3 - Multiply 2-digits by 1-digit

1 Brett uses a place value chart to work out  $5 \times 32$



Complete the multiplication.

$5 \times 32 =$

Use Brett's method to work out  $6 \times 34$

$6 \times 34 =$

2 Rosie works out  $4 \times 37$  using a written method.

		H	T	O					
			3	7					
	x			4					
			2	8			(7 x 4)		
		1	2	0			(3 0 x 4)		
		1	4	8					


Use Rosie's method to work out  $6 \times 28$


3 Dani uses a different written method to work out  $8 \times 42$

H


		T	O		
			4	2	
	x			8	
			3	3	6
			1		

Use Dani's method to work out  $3 \times 27$




**4** Use a written method to complete the multiplications.

a)  $38 \times 6 =$        c)  $45 \times 9 =$




b)  $71 \times 3 =$        d)  $52 \times 5 =$



e)  $29 \times 8 =$

f)  $17 \times 4 =$



**5** Class 4 is selling tickets for a play.

Tickets cost £5 per person.

56 tickets have been sold so far.

How much money has Class 4 collected?

**6** Daisy buys 8 bunches of flowers. Each bunch has 17 flowers.

How many flowers does she have altogether?