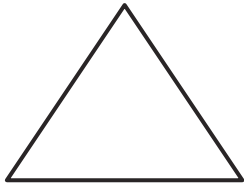


Day 1- sheet 1 This week we are going to be thinking about shape. Can you name these 2D shapes? Use these words to help you:


- Pentagon (5-sided shape)
- Square
- Hexagon (6-sided shape)
- Circle
- Octagon (8-sided shape)
- Rectangle




Name of shape: _____



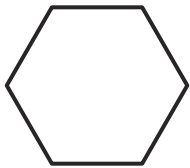
Name of shape: _____



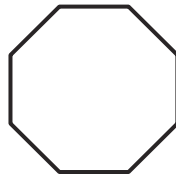
Name of shape: _____



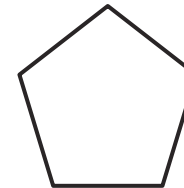
Name of shape: _____



Name of shape: _____



Name of shape: _____



Name of shape: _____