


# Recognise equal groups



- 1 Are these groups equal?  
Discuss with your talking partner and explain why.

a




\_\_\_\_\_

\_\_\_\_\_

\_\_\_\_\_

b



\_\_\_\_\_

\_\_\_\_\_

\_\_\_\_\_

c

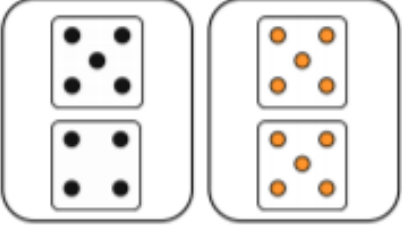


\_\_\_\_\_

\_\_\_\_\_

\_\_\_\_\_

d



\_\_\_\_\_

\_\_\_\_\_

\_\_\_\_\_

- 2 There are 5 equal groups with three in each group. Draw a picture to show this.

