

Lesson 1

Step: Count and write numbers to 20

Let's count to 20...

1

one

2

two

3

three

4

four

5

five

6

six

7

seven

8

eight

9

nine

10

ten

11

eleven

12

twelve

13

thirteen

14

fourteen

15

fifteen

16

sixteen

17

seventeen

18

eighteen

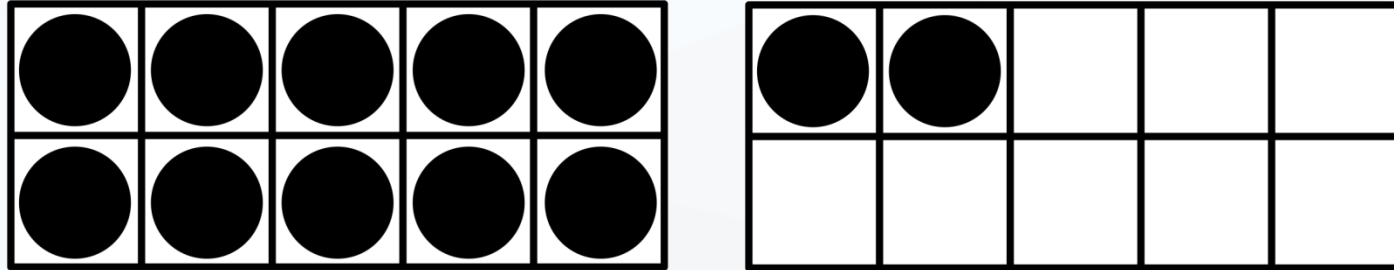
19

nineteen

20

twenty


What number is represented?



Number 12

Word twelve


What number is represented?



Number 14

Word fourteen

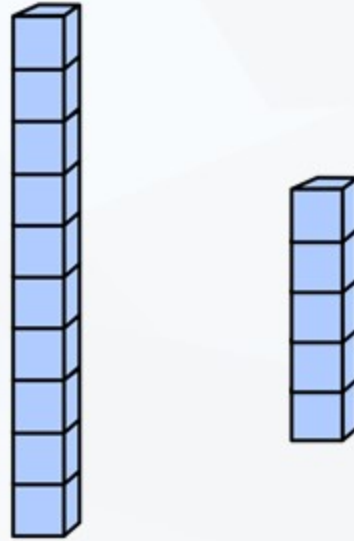
What number is represented?



Number 19

Word nineteen

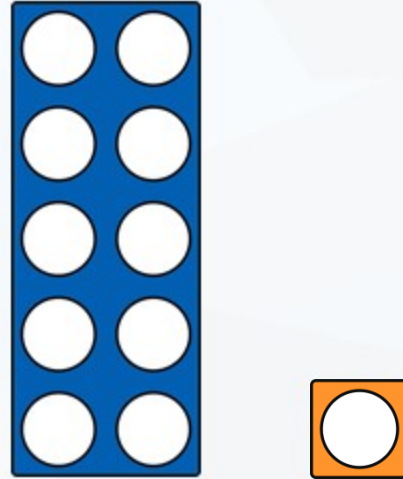
What number is represented?



Number 15

Word fifteen

What number is represented?



Number 11

Word eleven

Complete the number tracks.

7	8	9	10	11
---	---	---	----	----

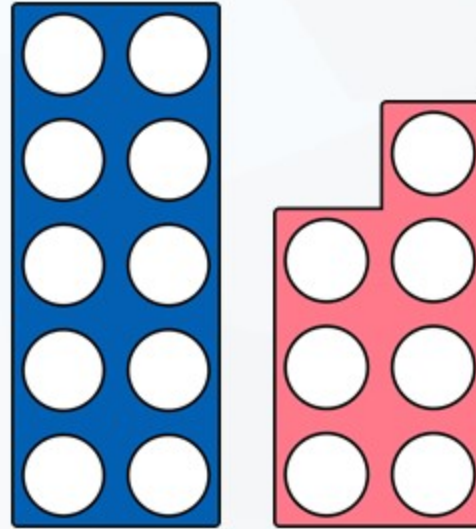
thirteen	fourteen	fifteen	sixteen	seventeen	eighteen
----------	----------	---------	---------	-----------	----------

Complete the number tracks.

19	18	17	16	15
----	----	----	----	----

sixteen	fifteen	fourteen	thirteen	twelve	eleven
---------	---------	----------	----------	--------	--------

Jack says the number frames represents the number sixteen.



Is Jack correct? No

Explain your answer.

The number frames represents the number 17 (seventeen).