

Number bonds (2)




Describe the number bonds shown and complete the number sentences.

a 8 and 2 make _____ _____ is made of 8 and 2

8 + 2 = _____ 2 + 8 = _____


10 - 8 = _____ 10 - 2 = _____



b 1 and 9 make _____ _____ is made of 1 and 9

1 + 9 = _____ 9 + 1 = _____

10 - 1 = _____ 10 - 9 = _____



c 4 and 6 make _____ _____ is made of _____ and _____

4 + 6 = _____ _____ + _____ = 10

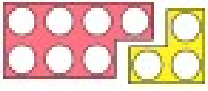
10 - 4 = _____ _____ - _____ = 4



d 7 and 3 make _____ _____ is made of _____ and _____

7 + 3 = _____ _____ + _____ = 10


10 - 7 = _____ 10 - 3 = _____



e 5 and 5 make _____ _____ is made of _____ and _____

5 + 5 = _____ _____ + _____ = 10


10 - 5 = _____ _____ - _____ = 5



f 2 and 8 make 10 _____ is made of _____ and _____

_____ + _____ = _____ _____ + _____ = _____

_____ - _____ = _____ _____ - _____ = _____

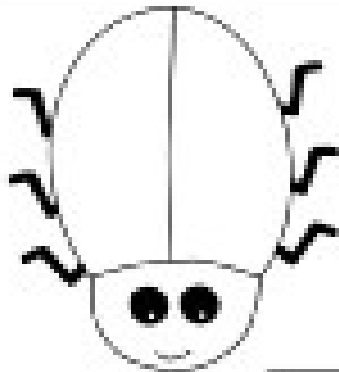




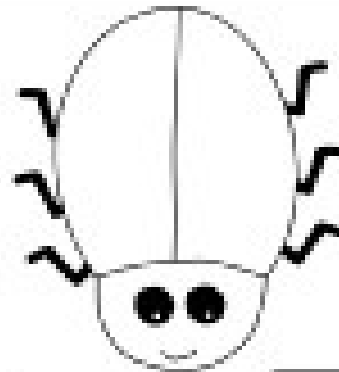
Ladybird Spot Addition



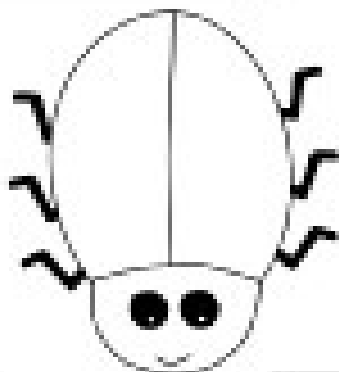
Add spots to the ladybirds to help finish the number sentences.



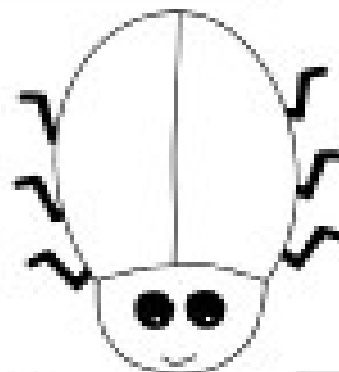
$$6 + 5 = \square$$



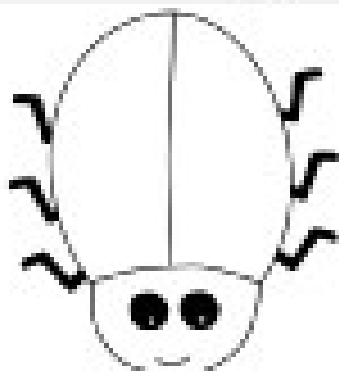
$$9 + 2 = \square$$



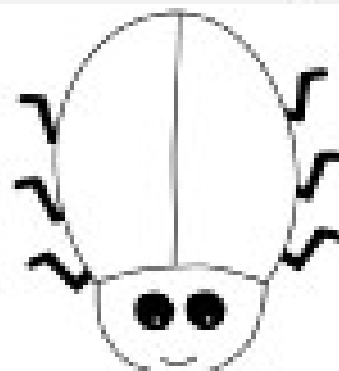
$$3 + 7 = \square$$



$$10 + 4 = \square$$



$$8 + 3 = \square$$



$$9 + 9 = \square$$

