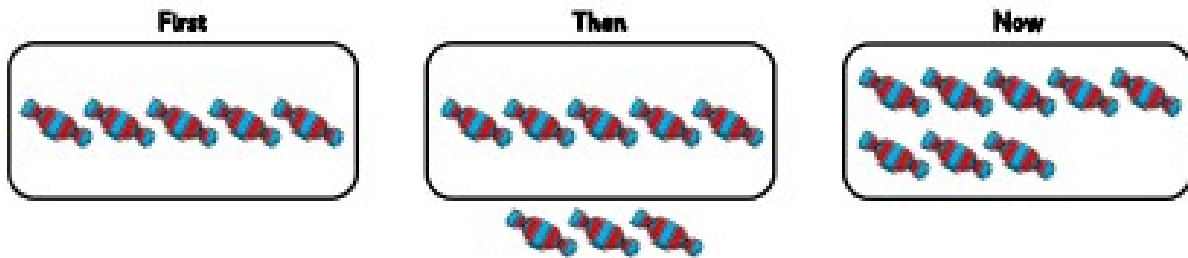


Adding by counting on (1)

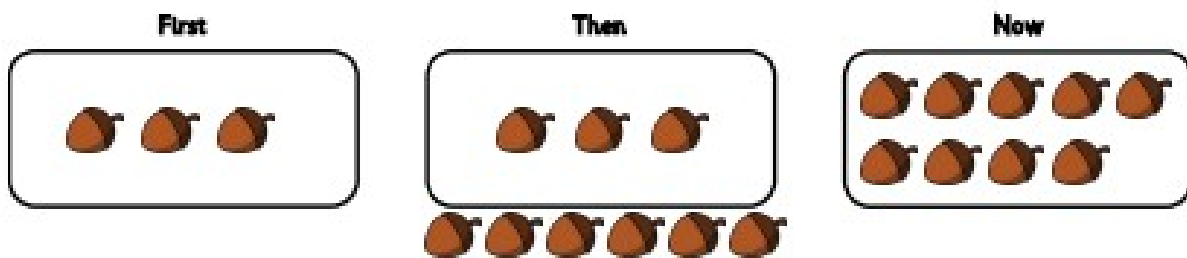


Complete the sentences.

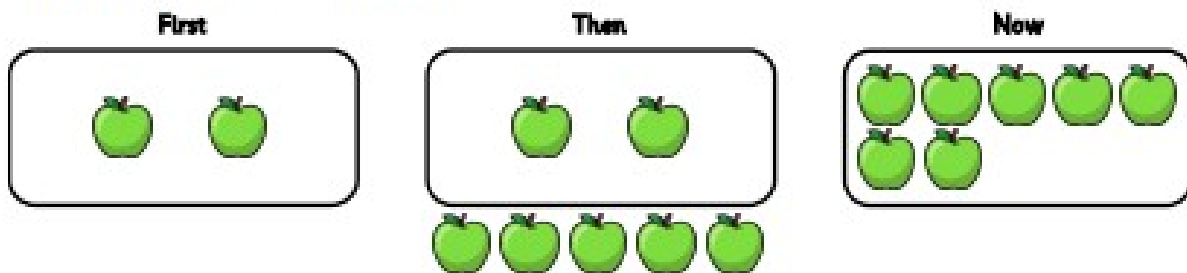
- a First there were 5 sweets. Then 3 more were added.
Now there are ____ sweets.




- b First there were 3 acorns. Then ____ more were added.
Now there are ____ acorns.



- c First there were 2 apples. Then ____ more were added.
Now there are ____ apples.



- d First there were 6 doughnuts. Then ____ more were added.
Now there are ____ doughnuts.



Name: _____

Addition: Counting On


(Adding within 10)



1. $3 + 2 = \square$



2. $5 + 2 = \square$



3. $6 + 4 = \square$



4. $8 + 1 = \square$



5. $7 + 2 = \square$



6. $3 + 3 = \square$

5



Name _____

Start at the first number. Use the dice to count on. Write the new number in the box.

$$\boxed{5} + \boxed{\begin{array}{c} \bullet \\ \bullet \end{array}} = \boxed{}$$

$$\boxed{8} + \boxed{\begin{array}{cc} \bullet & \bullet \\ \bullet & \bullet \end{array}} = \boxed{}$$

$$\boxed{3} + \boxed{\begin{array}{c} \bullet \\ \bullet \\ \bullet \end{array}} = \boxed{}$$

$$\boxed{6} + \boxed{\begin{array}{cc} \bullet & \bullet \\ \bullet & \bullet \\ \bullet & \bullet \end{array}} = \boxed{}$$

$$\boxed{4} + \boxed{\begin{array}{c} \bullet \\ \bullet \\ \bullet \end{array}} = \boxed{}$$