














# Compare volume



Compare the volumes of liquid. Write **most** or **least** in the boxes.  
Then complete the sentences by writing **more** or **less**.

<p>1.</p> <div style="display: flex; justify-content: space-around; align-items: center;"> <div style="text-align: center;">   <input style="width: 100px; height: 30px;" type="text"/> </div> <div style="text-align: center;">   <input style="width: 100px; height: 30px;" type="text"/> </div> </div>	<p>2.</p> <div style="display: flex; justify-content: space-around; align-items: center;"> <div style="text-align: center;">   <input style="width: 100px; height: 30px;" type="text"/> </div> <div style="text-align: center;">   <input style="width: 100px; height: 30px;" type="text"/> </div> </div>
<p>3.</p> <div style="display: flex; justify-content: space-around; align-items: center;"> <div style="text-align: center;">   <b>A</b> </div> <div style="text-align: center;">   <b>B</b> </div> <div style="text-align: center;">   <b>C</b> </div> </div> <div style="margin-left: 20px; margin-top: 10px;"> <p>A has _____ than B.</p> <p>B has _____ than A.</p> <p>C has _____ than A.</p> <p>B has _____ than C.</p> </div>	
<p>4.</p> <div style="display: flex; justify-content: space-around; align-items: center;"> <div style="text-align: center;">   <b>A</b> </div> <div style="text-align: center;">   <b>B</b> </div> <div style="text-align: center;">   <b>C</b> </div> </div> <div style="margin-left: 20px; margin-top: 10px;"> <p>B has _____ than C.</p> <p>A has _____ than B.</p> <p>C has _____ than A.</p> <p>B has _____ than A.</p> </div>	
<p>5.</p> <div style="display: flex; justify-content: space-around; align-items: center;"> <div style="text-align: center;">   <b>A</b> </div> <div style="text-align: center;">   <b>B</b> </div> <div style="text-align: center;">   <b>C</b> </div> </div> <div style="margin-left: 20px; margin-top: 10px;"> <p>C has _____ than B.</p> <p>B has _____ than A.</p> <p>C has _____ than A.</p> <p>B has _____ than C.</p> </div>	