




Number Bonds to 10 Ten-Frames




$$\boxed{5} + \boxed{} = \boxed{10}$$




$$\boxed{1} + \boxed{} = \boxed{10}$$




$$\boxed{3} + \boxed{} = \boxed{}$$



$$\boxed{} + \boxed{} = \boxed{10}$$




$$\boxed{} + \boxed{2} = \boxed{}$$

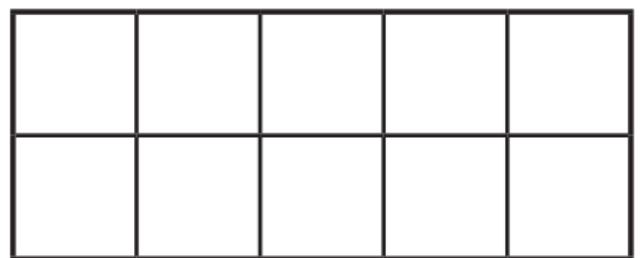


$$\boxed{} + \boxed{} = \boxed{10}$$

Can you create your own?



$$\boxed{} + \boxed{} = \boxed{}$$



$$\boxed{} + \boxed{} = \boxed{}$$

Sheet 6— Bees and Frogs