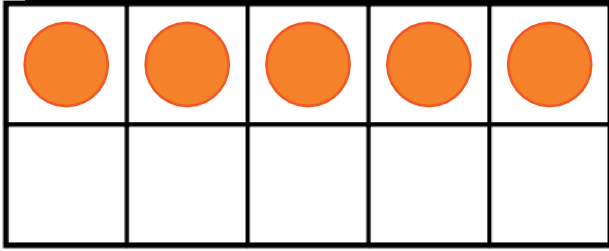



Subtraction to 10 Ten-Frames


Sheet 6 – Maths Bees and Butterflies



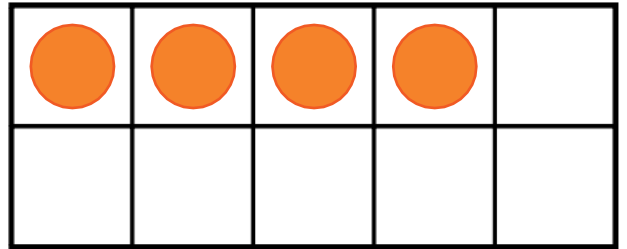
$$\boxed{5} - \boxed{2} = \boxed{}$$



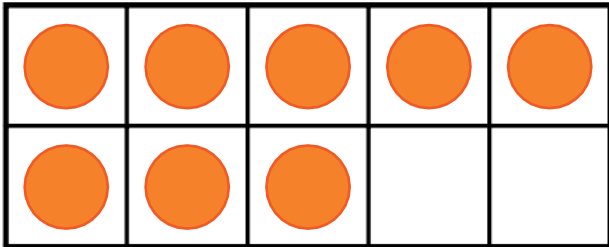
$$\boxed{9} - \boxed{5} = \boxed{}$$




$$\boxed{7} - \boxed{3} = \boxed{}$$



$$\boxed{4} - \boxed{2} = \boxed{}$$




$$\boxed{8} + \boxed{3} = \boxed{}$$

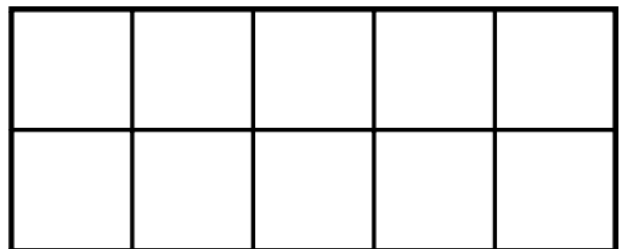


$$\boxed{10} + \boxed{6} = \boxed{}$$

Can you create your own?



$$\boxed{6} + \boxed{5} = \boxed{}$$



$$\boxed{} + \boxed{} = \boxed{}$$