

2 Times Table Activities

Count in 2s and colour in the grid:

1	2	3	4	5
6	7	8	9	10
11	12	13	14	15
16	17	18	19	20
21	22	23	24	25

Work out these answers:

a) $1 \times 2 =$ _____

g) $2 \times 2 =$ _____

b) $3 \times 2 =$ _____

h) $4 \times 2 =$ _____

c) $5 \times 2 =$ _____

i) $6 \times 2 =$ _____

d) $7 \times 2 =$ _____

j) $8 \times 2 =$ _____

e) $9 \times 2 =$ _____

k) $10 \times 2 =$ _____

f) $11 \times 2 =$ _____

l) $12 \times 2 =$ _____

How many ears are there?

a)  _____ x _____ = _____

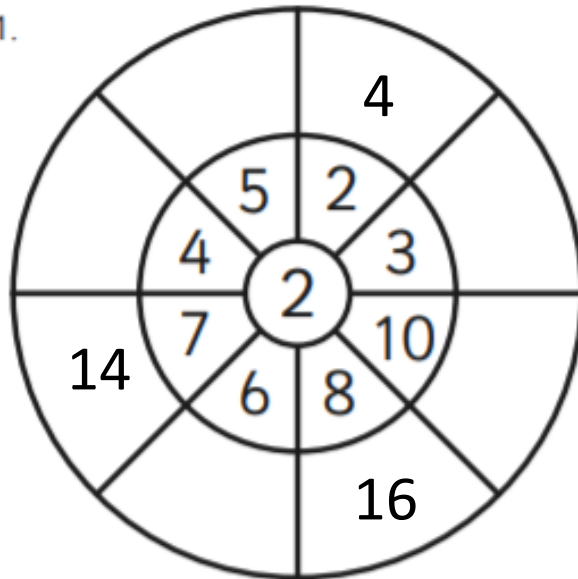
b)  _____ x _____ = _____

c)  _____ x _____ = _____

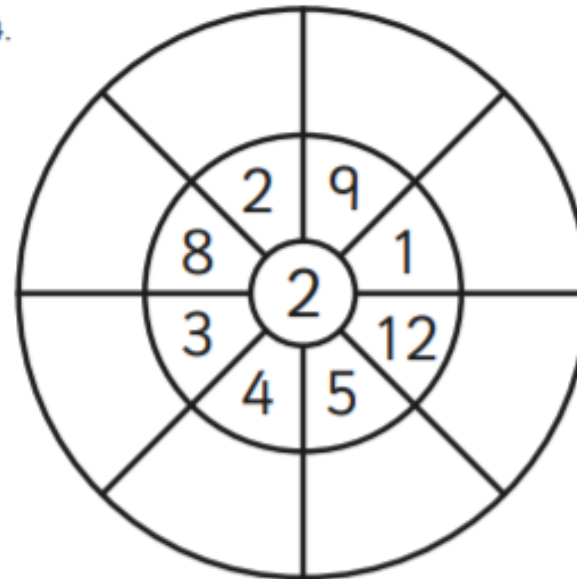
d)  _____ x _____ = _____

2 Times Table Multiplication Wheels

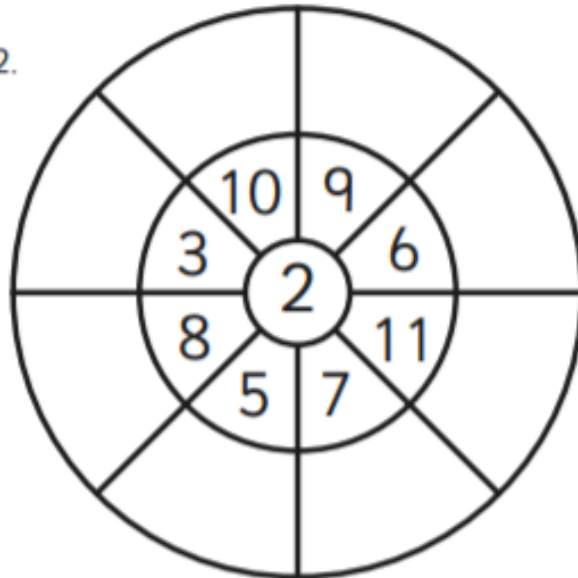
1.



4.



2.



5.

