


Make equal groups - sharing



1 Share the objects equally.

a 8 apples between two baskets.



There are 8 apples altogether.

There are 2 baskets.

There are _____ apples in each basket.

b 10 stamps between two envelopes.



There are 10 stamps altogether.

There are 2 envelopes.

There are _____ stamps on each envelope.

c 6 acorns between two squirrels.

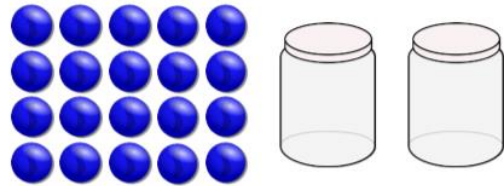


There are _____ acorns altogether.

There are _____ squirrels.

There are _____ acorns for each squirrel.

d 20 marbles between two jars.




There are _____ marbles altogether.

There are _____ jars.

There are _____ marbles in each jar.

e 24 eggs between two boxes.



There are _____ eggs altogether.

There are _____ boxes.

There are _____ eggs in each box.

2 Ben says,



I can share 20 biscuits equally between my 6 friends.

Is Ben correct? Explain your answer.
