


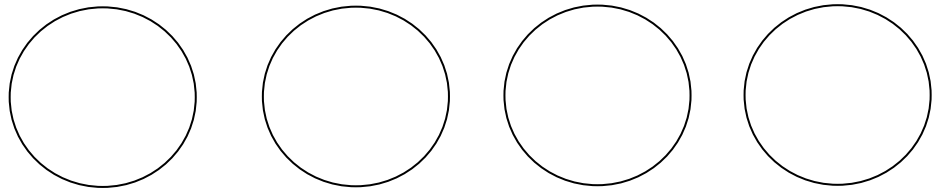
Dividing by sharing

Watch this video to remind you of how to share equally: www.youtube.com/watch?v=h4S4rfMxnP8

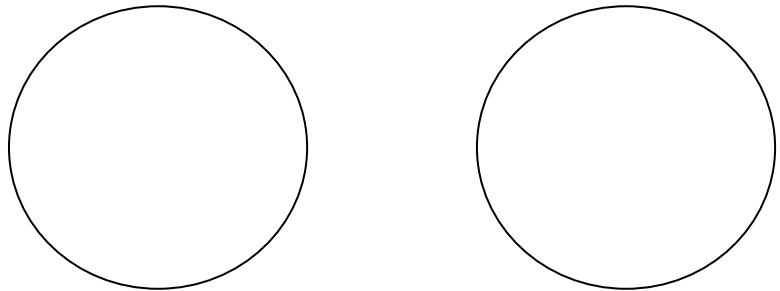
$15 \div 3 =$



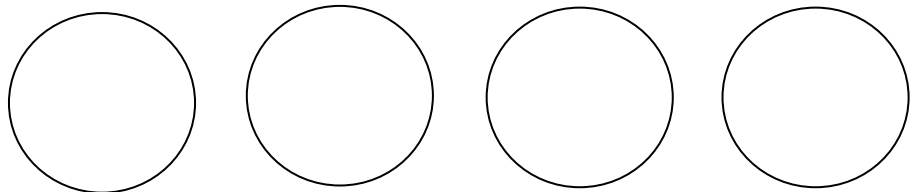
$20 \div 4 =$



$14 \div 2 =$



$24 \div 4 =$



Now have a go at drawing your own circles to share equally:

$$12 \div 2 =$$

$$21 \div 3 =$$

$$15 \div 5 =$$