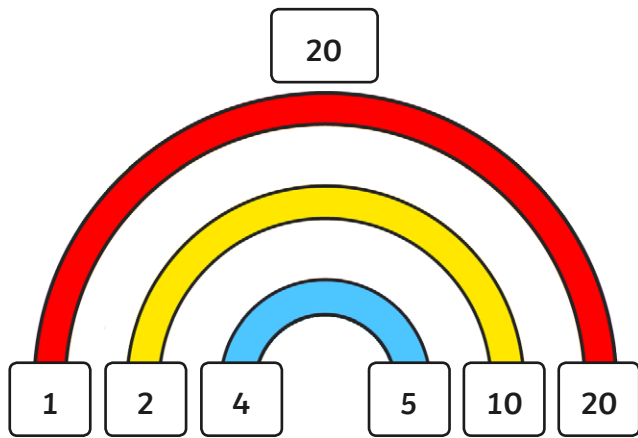
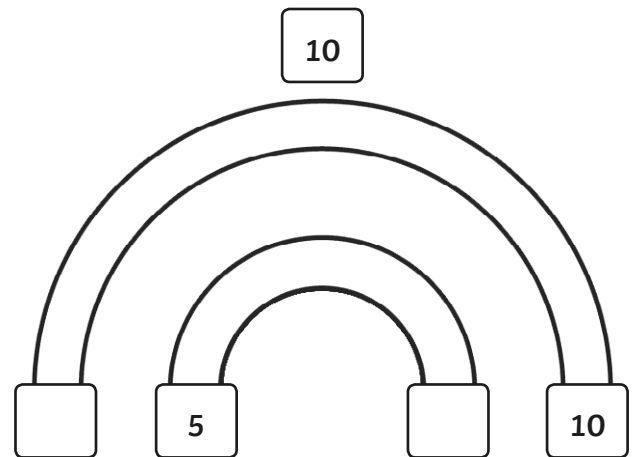


# Rainbow Factor Pairs

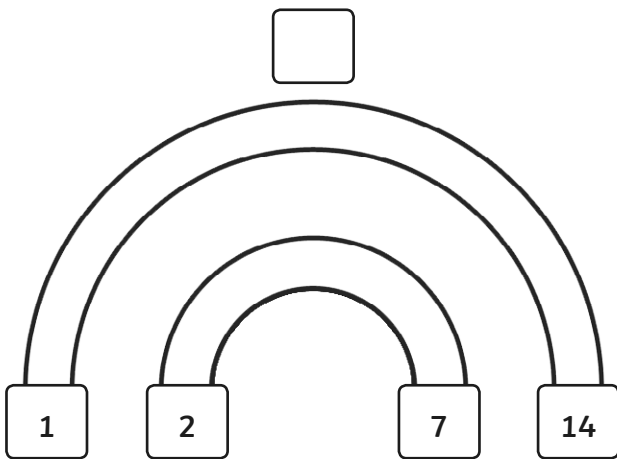
Multiply the numbers, colours and lines to complete the factor rainbows for each product. e.g.



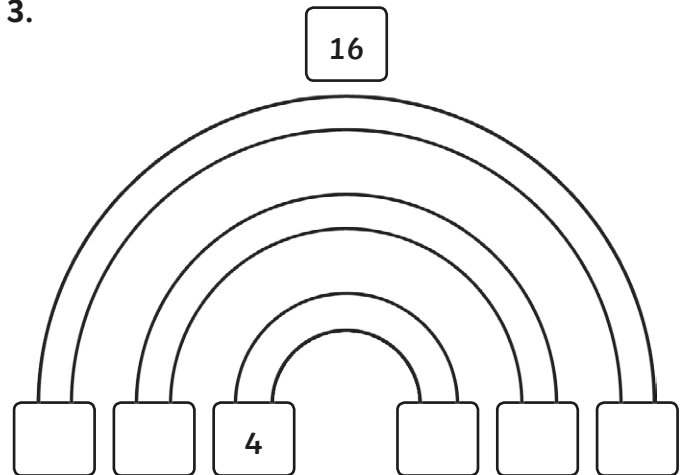
1.



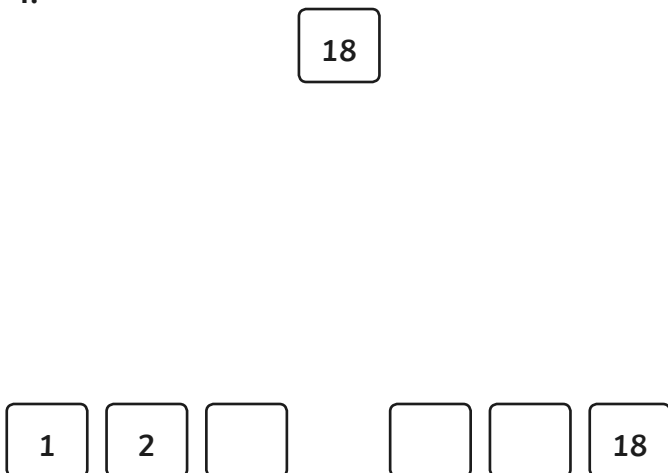
2.



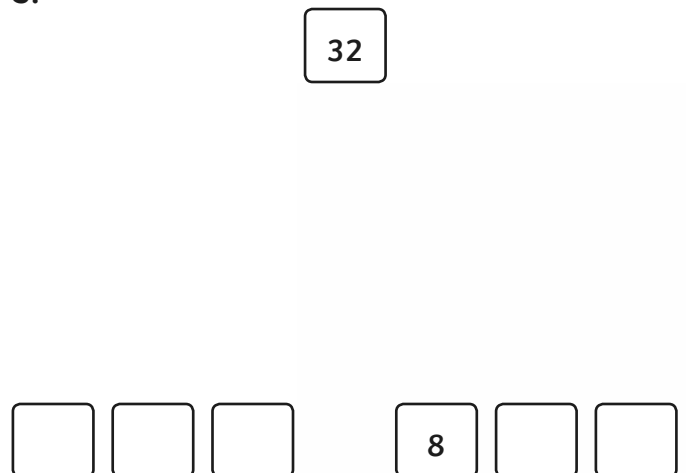
3.



4.

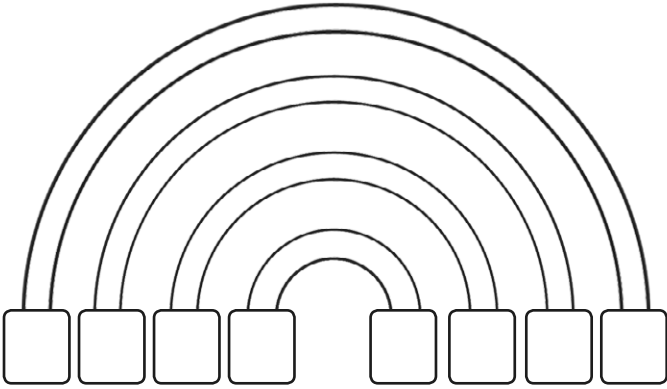


5.



6.

24



7. 36

8. 19

9. 50

10. 40

11. 100

## Rainbow Factor Pairs:

### Answers

---

question	answer
1	(10, 1) (5, 2)
2	14
3	(1, 16) (2, 8) (4)
4	(1, 18) (2, 9) (3, 6)
5	(1, 32) (2, 16) (4, 8)
6	(1, 24) (2, 12) (3, 8) (4, 6)
7	(1, 36) (2, 18) (3, 12) (4, 9) (6, 6)
8	(1, 19)
9	(1, 50) (2, 25) (5, 10)
10	(1, 40) (2, 20) (4, 10) (5, 8)
11	(1, 100) (2, 50) (4, 25) (5, 20) (10, 10)