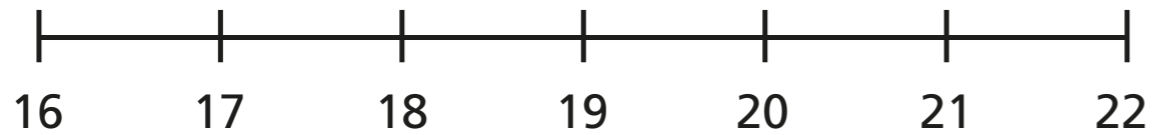


Subtract a 1-digit number from a 2-digit number – crossing 10

- 1 a) Use the number line to complete the calculations.



$22 - 1 =$ <input type="text"/>	$22 - 4 =$ <input type="text"/>
$22 - 2 =$ <input type="text"/>	$22 - 5 =$ <input type="text"/>
$22 - 3 =$ <input type="text"/>	$22 - 6 =$ <input type="text"/>

- b) Complete the subtraction.

$22 - 7 =$

How did you work it out?

Talk to a partner.



- 2 Use number bonds to complete the subtractions.
The first one has been done for you.

a) $13 - 5$

$10 - 2 = 8$

b) $12 - 9$

$10 - 7 =$


c) $16 - 8$


$-$ $=$


3 Complete the subtractions.

a) $14 - 9 =$ <input type="text"/>	d) $15 - 7 =$ <input type="text"/>
b) $14 - 8 =$ <input type="text"/>	e) $15 - 9 =$ <input type="text"/>
c) $17 - 8 =$ <input type="text"/>	f) $12 - 3 =$ <input type="text"/>

4 What is the difference between the numbers?

a)  $=$

b)  $=$

c)  $=$

How did you find the difference?



5 Complete the subtractions.

a) $31 - 7 =$ <input type="text"/>	e) $74 - 9 =$ <input type="text"/>
b) $46 - 9 =$ <input type="text"/>	f) $64 - 9 =$ <input type="text"/>
c) $32 - 8 =$ <input type="text"/>	g) $54 - 8 =$ <input type="text"/>
d) $32 - 3 =$ <input type="text"/>	h) $41 - 3 =$ <input type="text"/>

6 Use 3 digit cards to write a subtraction.

-

How many different answers can you find?

What is the largest difference?

What is the smallest difference?

