







Counting in 8s

Count in multiples of 8



Some of the multiples of 8 are missing from the number grid. Rewrite the number grid correctly, putting the multiples of 8 in order, smallest to largest.

	80		32
		48	
16	40		8

1 Write the previous multiple of 8 for these numbers.

- a 16 b 48 c 64 d 80 e 24

2 Write the next multiple of 8 for these numbers.


- a 40 b 8 c 32 d 72 e 56

3 Write the multiple of 8 that is two multiples of 8 more than these numbers.

- a 8 b 32 c 72 d 48 e 64

4 Write the multiple of 8 that is two multiples of 8 less than these numbers.

- a 24 b 80 c 40 d 56 e 96



Write the multiple of 8 that comes before these numbers.

