

Match the coin to its value



20p


50p

£2


£1

Write < or > to compare the amounts


a)




b)



c)



d)



The tooth fairy left some money for two children.




Jack has 50p
Tom has £1



Jack thinks he has more money because his coin is bigger.

Explain who is right and how you know.

Circle the money that is equal to the amount of money in the 10 frame



Which coins do these children have?

I have two coins.
The smallest coin
is bronze.

The largest coin
is round and has
two colours.



I have two
different coins.

They are both
silver and round.





Mo has a coin in his hand.



I have more than 2 pence,
but less than 1 pound.

1. Draw Mo's coin. What is the value?
2. Is there more than one answer?
3. Can you draw any other answers? What are the values?

How much money is there in each jar?



Which jar has the most money?