










Write down the values of these coins






Write  $<$  or  $>$  to compare the amounts


a)   

b)   

c)   

d)   

Circle the money that is equal to the amount on the ten frame



The tooth fairy left some money for two children

Jack has 5 20p coins



Tom has 2 £2 coins



Jack thinks he has more money because he has more coins.

Explain who is right and how you know.

---

---



Alex has 2 silver coins.

Teddy has 5 bronze coins.

Amir has 1 silver coin.

They all have the same amount of money.

Which coins do they each have?

Collect or draw the coins to prove it.

Are there any other amounts that this works for?

How much money is in each jar?



Which jar has the most money?

Using the money below, how many ways can you make 76p?  
(you can use the same coin more than once)

