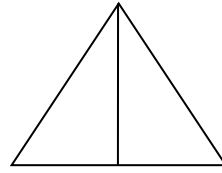

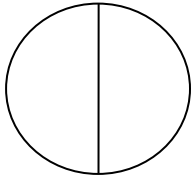
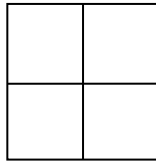
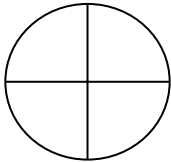


WALT: find $\frac{1}{2}$ and $\frac{1}{4}$ of shapes


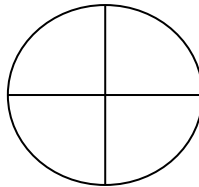
Colour 1 half of these shapes.



Colour 1 quarter of these shapes.

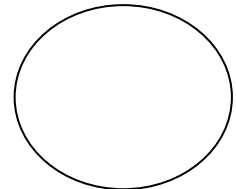
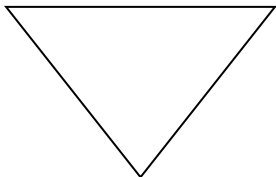


Label the shapes **whole**, **half** or **quarters**.

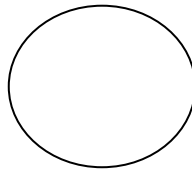




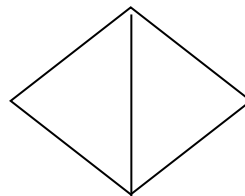
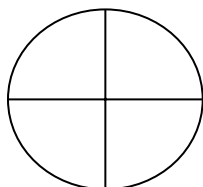
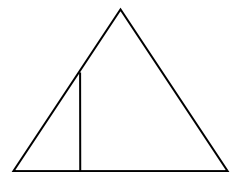
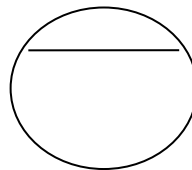
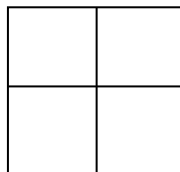

Use a ruler to show **half** of the shapes below.



Use a ruler to split the shapes into **quarters**.



 Tick and label which shapes have been split into halves and quarters equally.



WALT: find $\frac{1}{2}$ and $\frac{1}{4}$ of shapes