


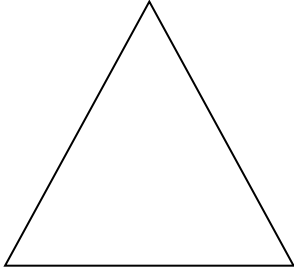
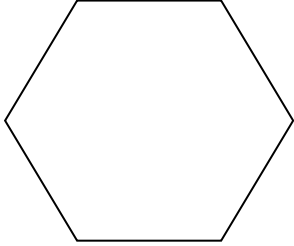


2D Shape Properties

Name _____

Write a description for each shape. Think carefully about their properties.

	<p>This 2D shape is a _____.</p> <p>It has</p>
	<p>This 2D shape is a _____.</p> <p>It has</p>
	<p>This 2D shape is a _____.</p> <p>It has</p>
	<p>This 2D shape is a _____.</p> <p>It has</p>
	<p>This 2D shape is a _____.</p> <p>It has</p>

Square Circle Rectangle Triangle Hexagon