





Telling the Time


It's time to go on holiday. Use the clocks to help plan the trip.



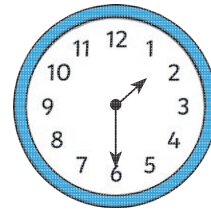
What time do you get up to go on holiday? _____




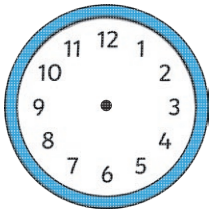
What time do you set off on holiday? _____



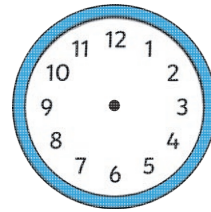
What time do you play on the beach? _____



What time do you eat an ice cream? _____



At 4 o'clock, you go swimming. Draw the hands on the clock.





At half past 6, you go to a disco. Draw the hands on the clock.

If you go on holiday the day after Sunday, what day will you go on holiday? _____


If you go to the beach on the second day of your holiday, what day will you go to the beach? _____

Telling the Time Answers



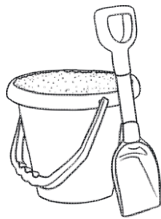

What time do you get up to go on holiday?

7 o'clock




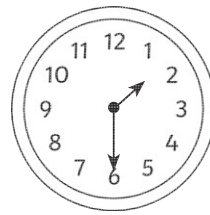
What time do you set off on holiday?

half past 8



What time do you play on the beach?

11 o'clock




What time do you eat an ice cream?

half past 1



At 4 o'clock, you go swimming.
Draw the hands on the clock.



At half past 6, you go to a disco.
Draw the hands on the clock.

If you go on holiday the day after Sunday, what day will you go on holiday?

Monday

If you go to the beach on the second day of your holiday, what day will you go to the beach?

Tuesday