

1 more than 17 is _____

1 less than 23 is _____

1 more than 37 is _____

1 less than 46 is _____

1 more than 9 is _____

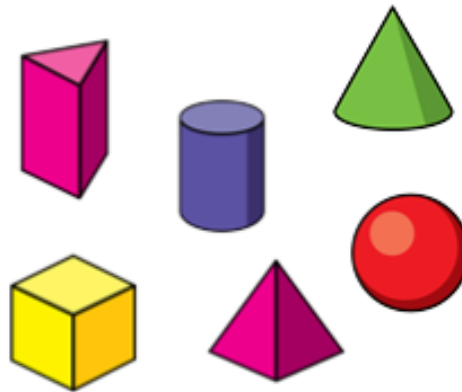
$$18 - 8 =$$

$$22 - 2 =$$

$$40 - 10 =$$

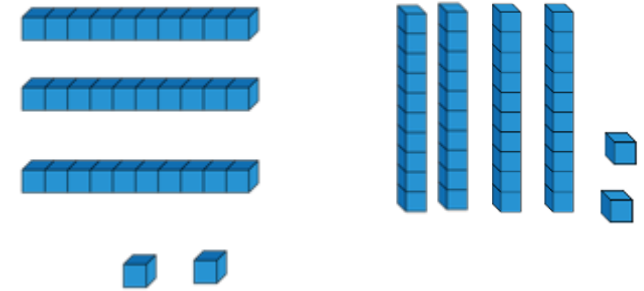
$$40 = 48 - \underline{\quad}$$

$$2 = 32 - \underline{\quad}$$



Circle the triangular prism

Circle the greatest amount



Match...

$$12 + 2$$

4

$$12 - 2$$

10

$$8 - 4$$

6

$$8 + 4$$

14

$$3 + 3$$

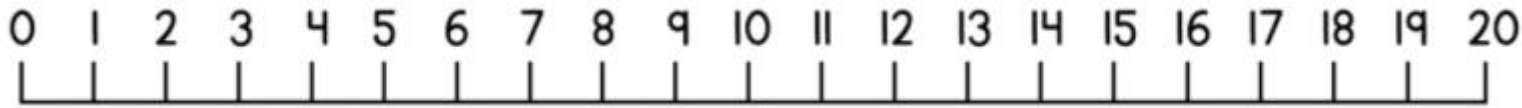
12

Write these numbers in words.

17 _____

9 _____

16 _____



thirsty one is 1 more than

eighteen is one less than

forty eight is 1 more than

$$38 - 18 =$$

$$37 - 17 =$$

$$24 - 20 =$$

$$22 = 42 - \underline{\quad}$$

$$10 = 56 - \underline{\quad}$$

Complete the facts for this 3D shape



Name: _____

Number of faces: _____

Match...

16 + 10 sixteen

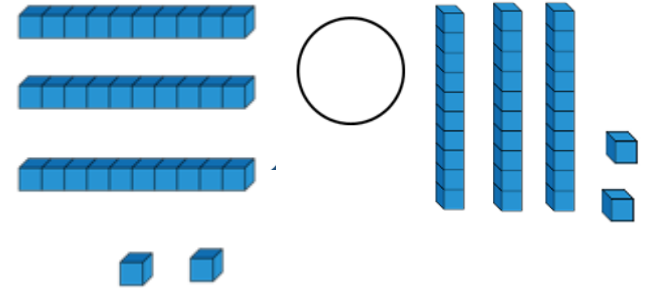
16 - 10 twenty six

16 - 6 six

6 + 10 ten

16 + 0 sixteen

Compare the equipment using <, > or =

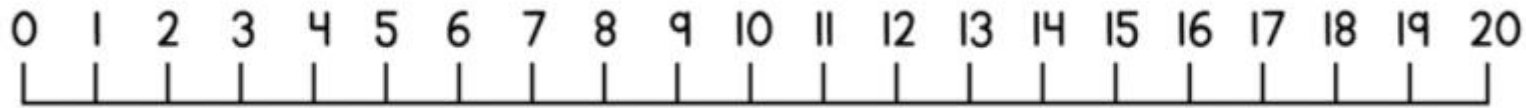


Write these answers in words.

$$10 - 7 = \underline{\hspace{2cm}}$$

$$50 - 10 = \underline{\hspace{2cm}}$$

$$30 - 10 = \underline{\hspace{2cm}}$$



Friday Level 1

1 more than 18 is _____

1 less than 12 is _____

1 more than 14 is _____

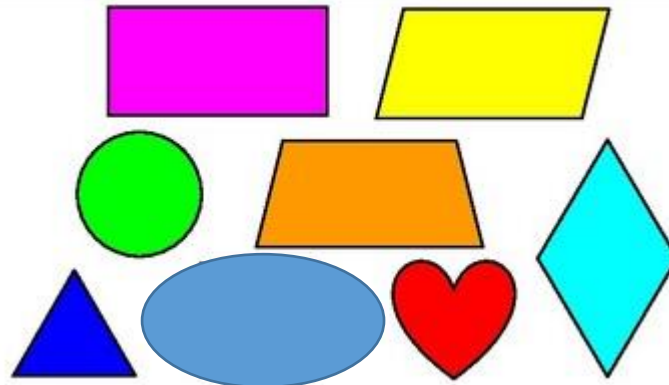
1 less than 18 is _____

$15 - 5 =$ _____

$16 - 6 =$ _____


$17 - 7 =$ _____

$18 - 8 =$ _____



Find the oval

How many?



Match...

- | | |
|---------|---|
| $3 - 2$ | 1 |
| $2 + 2$ | 5 |
| $5 - 1$ | 4 |
| $2 - 0$ | 4 |
| $4 + 1$ | 2 |

Match...

- | | |
|----|-----------|
| 11 | seventeen |
| 18 | eleven |
| 16 | sixteen |
| 17 | eighteen |

0 0 0 0 0

1 1 1 1 1

2 2 2 2 2

3 3 3 3 3

4 4 4 4 4

5 5 5 5 5

6 6 6 6 6

7 7 7 7 7

8 8 8 8 8

9 9 9 9 9