

1 more than 6 is _____

1 less than 13 is _____

1 more than 31 is _____

1 less than 25 is _____

1 more than 29 is _____

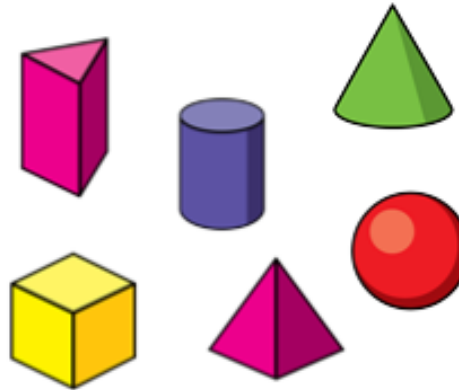
1 less than 19 is _____

1 less than 48 is _____

1 more than 41 is _____

1 less than 20 is _____

1 more than 38 is _____



Circle the cylinder

Circle the greatest number

12 16 35

41 28 40

1 ten and 6 ones = _____

1 ten and 8 ones = _____

2 tens and 5 ones = _____

3 tens and 0 ones = _____

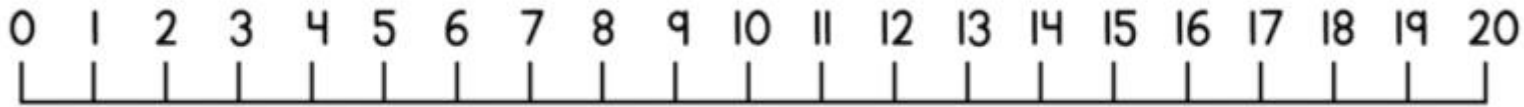
4 tens and 7 ones = _____

0 tens and 8 ones = _____

Which numbers are missing?

10, 9, 8, _____, _____, _____, 4

13, 12, 11, _____, _____, _____, _____



26 is 1 more than _____

39 is 1 more than _____

42 is 1 more than _____

38 is 1 more than _____

17 is 1 more than _____

_____ is 1 more than 28

_____ is 1 more than 41

_____ is 1 more than _____

_____ is 1 more than _____

I am a 3D shape.

I have six square faces.

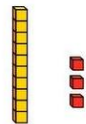
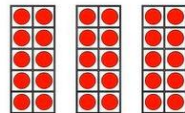
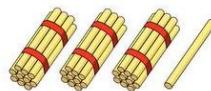
What shape am I?

Circle the greatest number

12 16 35

41 28 40

Match



13

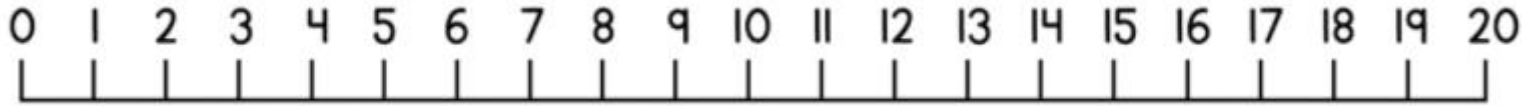
thirty

31

Which numbers are missing?

20, 19, 18, _____, _____, _____, 14

33, 32, 31, _____, _____, _____, _____



1 more than 1 is _____

1 more than 12 is _____

1 more than 10 is _____

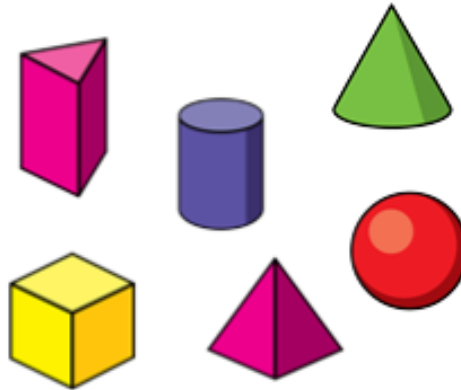
1 more than 8 is _____

1 less than 18 is _____

1 less than 11 is _____

1 less than 17 is _____

1 less than 6 is _____



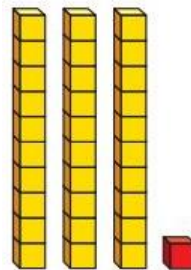
Circle the cylinder

Circle the greatest number

12 16 5

1 2 10

How many?



Which numbers are missing?

10, 9, 8, _____, _____, _____, 4

13, 12, 11, _____, _____, _____, _____

0 0 0 0 0

1 1 1 1 1

2 2 2 2 2

3 3 3 3 3

4 4 4 4 4

5 5 5 5 5

6 6 6 6 6

7 7 7 7 7

8 8 8 8 8

9 9 9 9 9