

1 more than 18 is \_\_\_\_\_

1 less than 21 is \_\_\_\_\_

1 more than 35 is \_\_\_\_\_

1 less than 44 is \_\_\_\_\_

1 more than 10 is \_\_\_\_\_

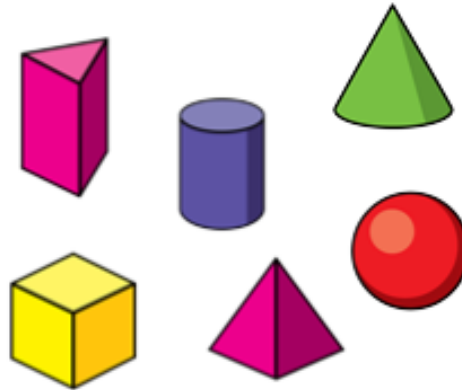
$$12 - 2 =$$

$$28 - 8 =$$

$$30 - 10 =$$

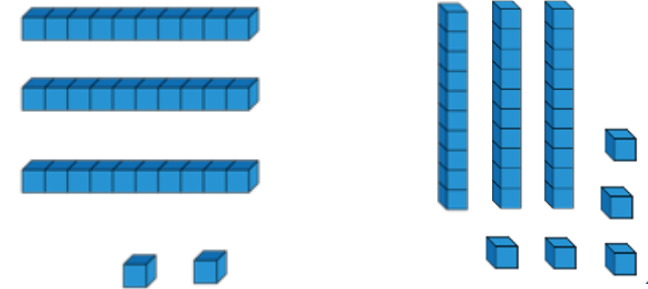
$$40 = 41 - \underline{\quad}$$

$$30 = 32 - \underline{\quad}$$



Circle the sphere

Circle the greatest amount



Match...

$$16 + 2$$

4

$$18 - 2$$

18

$$8 - 4$$

10

$$6 - 2$$

4

$$5 + 5$$

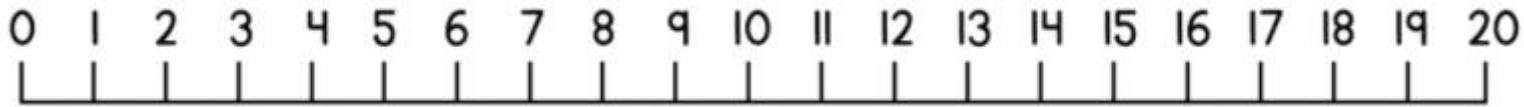
16

Write these numbers in words.

19 \_\_\_\_\_

7 \_\_\_\_\_

0 \_\_\_\_\_



thirsty six is 1 more than

\_\_\_\_\_

fourteen is one less than

\_\_\_\_\_

twenty eight is 1 more than

\_\_\_\_\_

$$28 - 18 =$$

$$47 - 17 =$$

$$44 - 20 =$$

$$30 = 42 - \underline{\quad}$$

$$16 = 56 - \underline{\quad}$$

Complete the facts for this 3D shape



Name: \_\_\_\_\_

Number of faces: \_\_\_\_\_

Match...

$$16 + 12$$

five

$$18 - 12$$

twenty eight

$$18 - 13$$

thirty

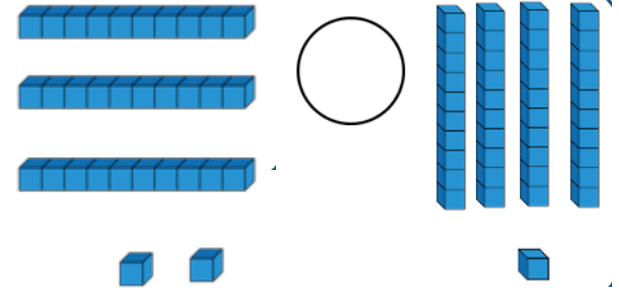
$$28 - 18$$

ten

$$16 + 14$$

six

Compare the equipment using  $<$ ,  $>$  or  $=$

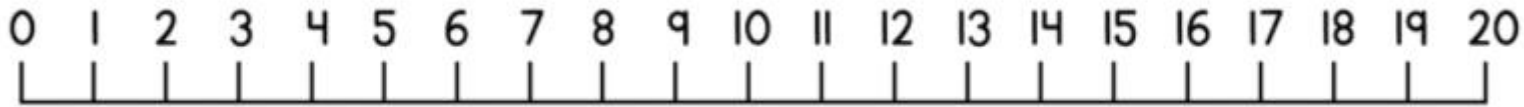


Write these answers in words.

$$20 - 7 = \underline{\hspace{2cm}}$$

$$40 - 10 = \underline{\hspace{2cm}}$$

$$20 - 20 = \underline{\hspace{2cm}}$$



1 more than 12 is \_\_\_\_\_

1 less than 13 is \_\_\_\_\_

1 more than 19 is \_\_\_\_\_

1 less than 14 is \_\_\_\_\_

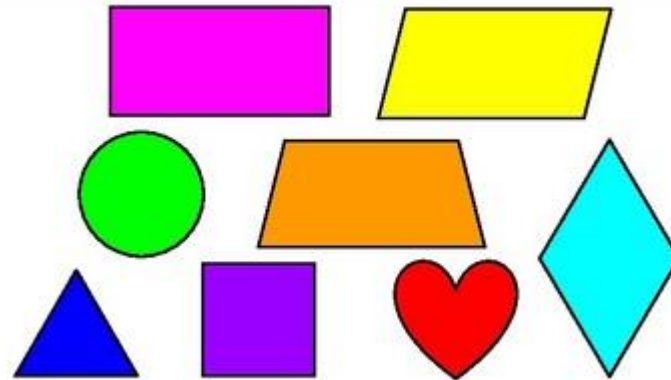
-----

$11 - 1 =$  \_\_\_\_\_

$12 - 2 =$  \_\_\_\_\_

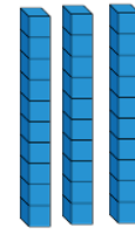
$13 - 3 =$  \_\_\_\_\_

$14 - 4 =$  \_\_\_\_\_



Find the triangle

How many?



\_\_\_\_\_

Match...

- |         |   |
|---------|---|
| $3 + 2$ | 0 |
| $2 - 2$ | 5 |
| $5 + 1$ | 6 |
| $2 + 0$ | 3 |
| $4 - 1$ | 2 |

Match...

- |   |       |
|---|-------|
| 1 | three |
| 8 | two   |
| 2 | eight |
| 3 | one   |

0 0 0 0 0

1 1 1 1 1

2 2 2 2 2

3 3 3 3 3

4 4 4 4 4

5 5 5 5 5

6 6 6 6 6

7 7 7 7 7

8 8 8 8 8

9 9 9 9 9