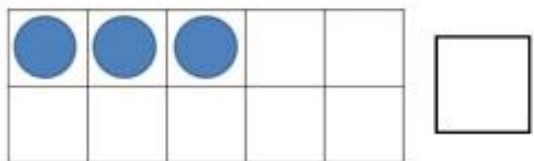
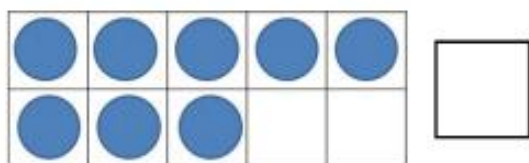
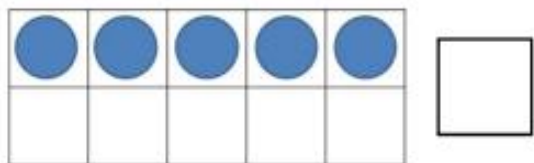
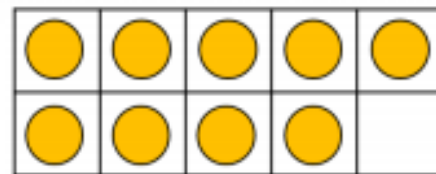


Maths day 2: To recognise quantities on a ten frame.

Write in the missing amount.



Tom says he knows this ten frame shows 9 because there is one counter missing.



Is he correct? How do you know?

Draw counters to represent the number.

