
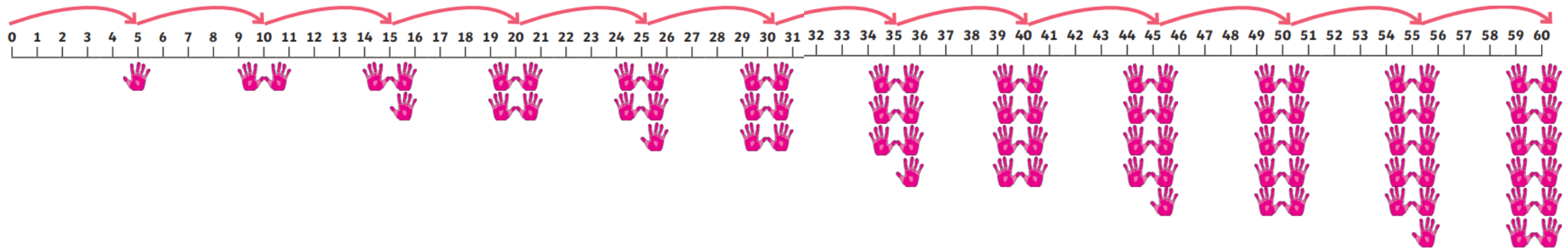


Practice counting in 5s



5 children take a strawberry.
How many are left?

First count how many strawberries you have.

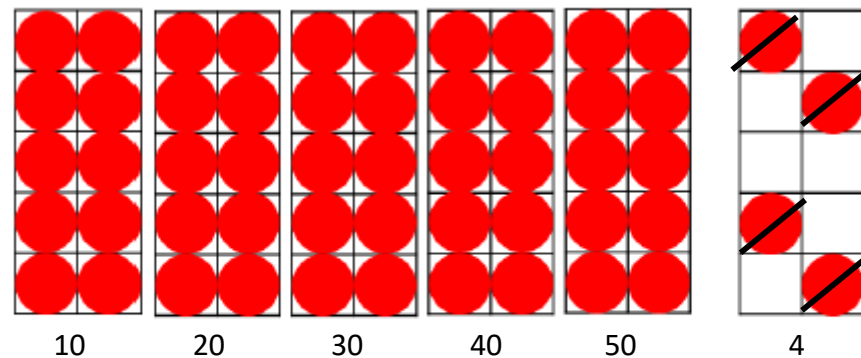
Write the number sentence

$$28 - 5 =$$

Count back to take away five strawberries. You can cross out the strawberries as you count. How many do you have left? $23 = 28 - 5$

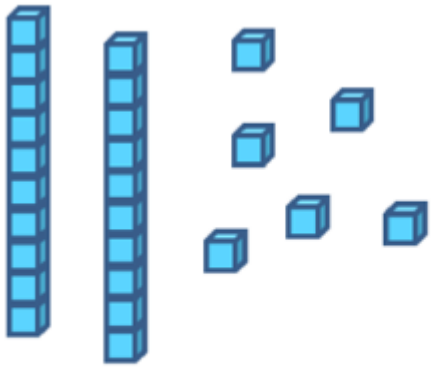
Count how many you have to start with to complete the number sentence.
Cross out the four you are taking away.

Count how many you have left to complete the number sentence.



$$\underline{54} - \underline{4} = \underline{\quad}$$

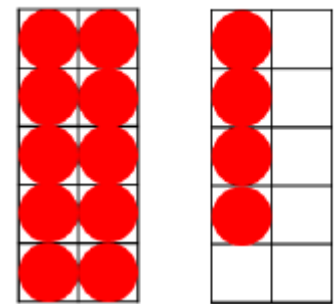
Task 1: Complete the number sentence – make sure you cross out the amount you are taking away.



$$\underline{\quad 26 \quad} - \underline{\quad 4 \quad} = \underline{\quad \quad}$$



$$\underline{\quad 36 \quad} - \underline{\quad 3 \quad} = \underline{\quad \quad}$$

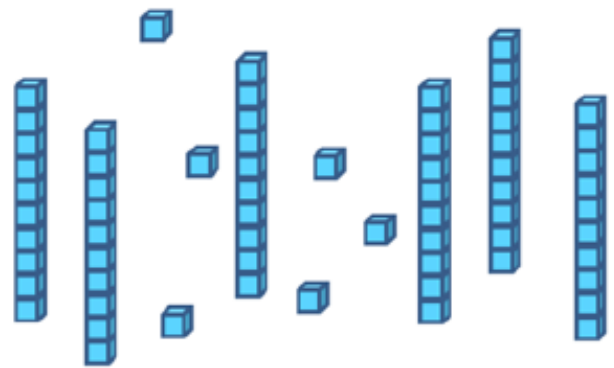


$$\underline{\quad 14 \quad} - \underline{\quad 2 \quad} = \underline{\quad \quad}$$


Task 2: Complete the number sentence – this time you will need to count the amount you have to start with then cross out what you are subtracting and then count what you have left.



$$\underline{\quad \quad} - \underline{\quad 6 \quad} = \underline{\quad \quad}$$



$$\underline{\quad \quad} - \underline{\quad 5 \quad} = \underline{\quad \quad}$$



$$\underline{\quad \quad} - \underline{\quad 8 \quad} = \underline{\quad \quad}$$