

Year 2 – Maths – Lesson 3

LO: To compare two 2-digit amounts

Task 1: Have a think about this question – who do you think is correct?

Why?

I think that 52 is more than 29 because it has 5 tens.



Tom

I think that 29 is more than 52 because it has a 9 in.



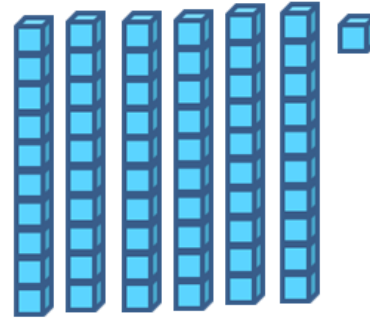
Ben

Who is correct? How do you know?

Task 2: Explain how you know it is more.

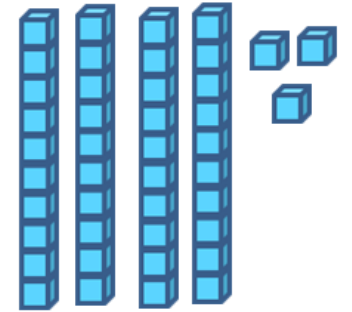
Which is more?

61



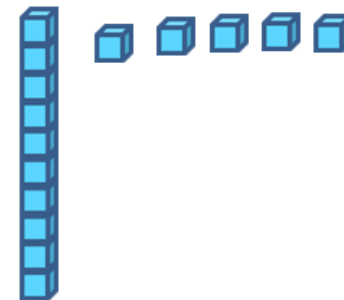
Which is less?

43



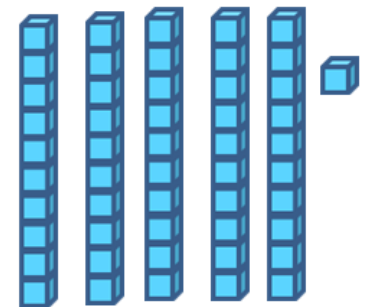
Which is more?

15



Which is less?

51



Task 4: Use the numbers to fill in the boxes. Use the space around you to draw base ten to help you.

13 88 52 63 24 42 13 79 36

Task 3: Write the correct number on the line.  
Make sure your numbers are the right way around.

26	62
26	62
50	51

Which number is **more**? \_\_\_\_\_

Which number is **less**? \_\_\_\_\_

Which number is **more**? \_\_\_\_\_

is less than

is more than

is more than

is less than

is less than

is more than

is equal to