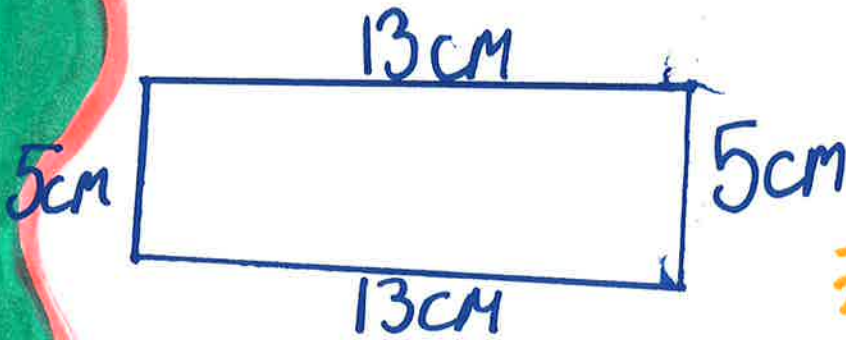


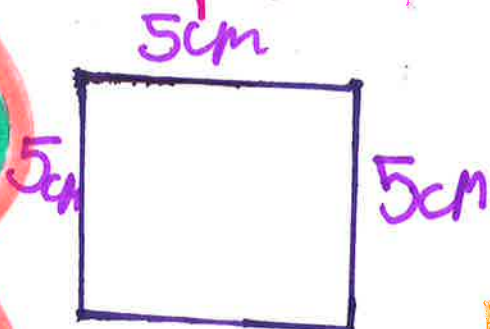
PERIMETERS

Perimeter of a Rectangle



Perimeter = $13 + 13 + 5 + 5 = 36\text{cm}$

perimeter of a Square

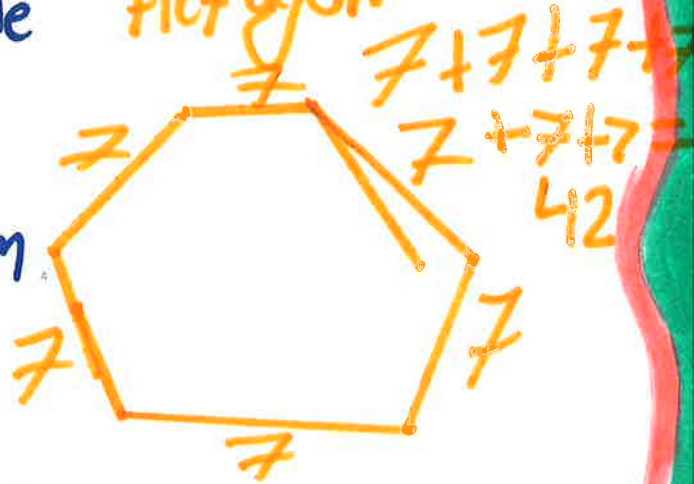


perimeter = $5 + 5 + 5 + 5 = 20$



π
3.142 + 
(Circumference)

perimeter of a Hexagon

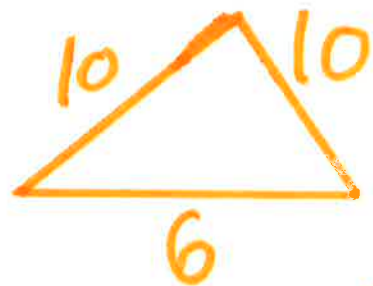


perimeter of a pentagon



perimeter = $6 + 6 + 6 + 6 + 6 = 30$

perimeter of a triangle



perimeter = $10 + 10 + 6 = 26$