


Add equal groups

I Complete the sentences.




There are

apples in each bag.



There are

bags.



There are

equal groups of

There are

apples altogether.

+

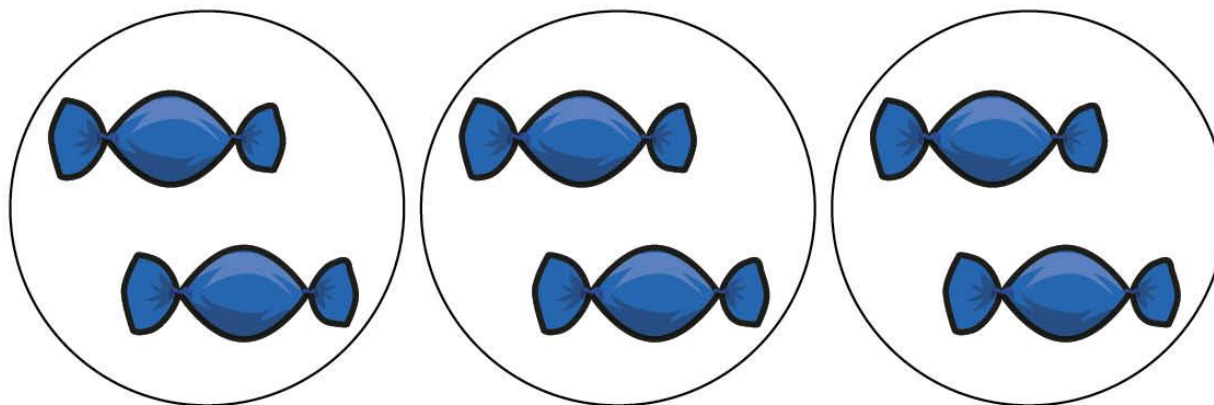
+

+

=



2 How many sweets are there?



$$\square + \square + \square = \square$$

There are sweets.



3 How many marbles are there?




$$\square + \square + \square = \square$$

There are marbles.



4 How many candles are there?



$$\square + \square + \square + \square = \square$$

There are candles.



5 Use counters to show the equal groups.

Complete the number sentences.

a) $2 + 2 + 2 + 2 =$

b) $5 + 5 + 5 + 5 + 5 =$



6 There are 7 equal groups of 5 counters.

How many counters are there altogether?

There are counters altogether.