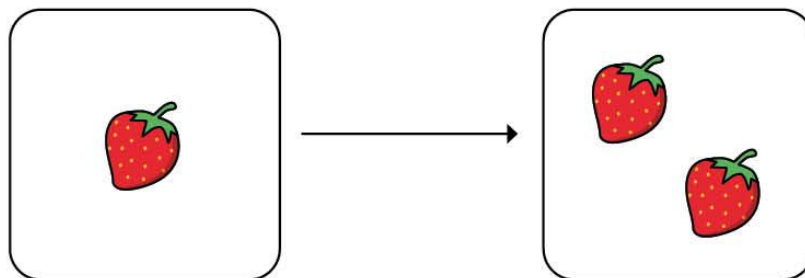


Make doubles

I Complete the sentences.

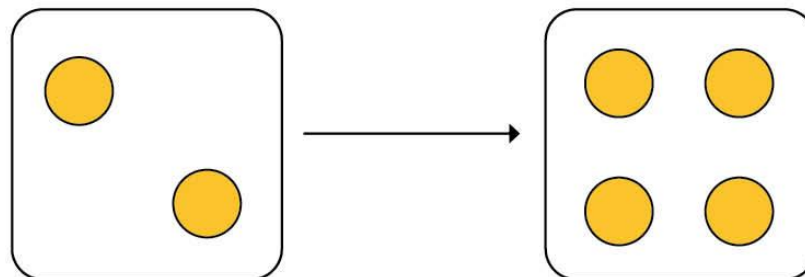
Use the pictures to help you.

a)



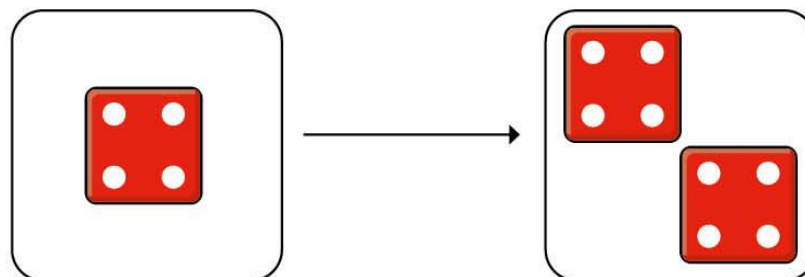
Double 1 is

I b)



Double 2 is

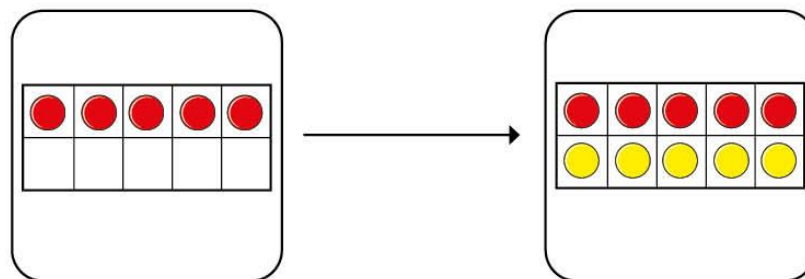
c)



Double

is

I d)



Double

is



2 Match the doubles to the additions.

Double 3

Double 6

Double 10

Double 7

$$6 + 6$$

$$7 + 7$$

$$3 + 3$$

$$10 + 10$$



3 Fill in the gaps.

a) Double 15 is

b) Double 11 is


c) Double 12 is

d) Double 20 is

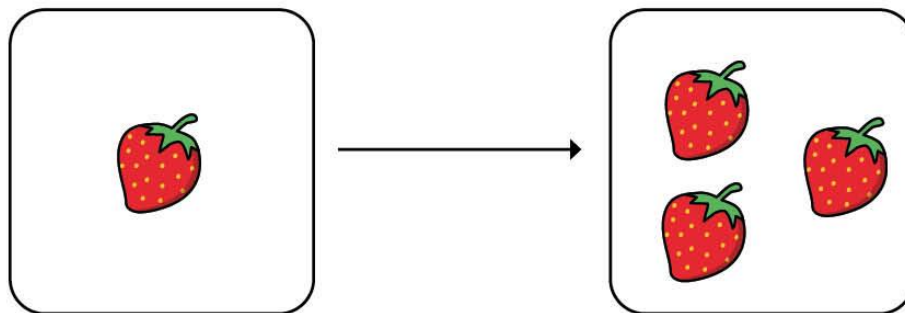
e) Double is 8

f) Double is 16

4



I have doubled the
number of strawberries.



Do you agree with Mo? _____

Talk about it with a partner.

