

# Make equal groups – grouping

**I** Here are some socks.



**a)** Draw lines to match the pairs of socks.




**I** b) Complete the sentences.

There are  socks altogether.

There are  socks in each pair.

There are  pairs of socks.

**2** Here are some counters.



a) Circle groups of 2

b) Complete the sentences.

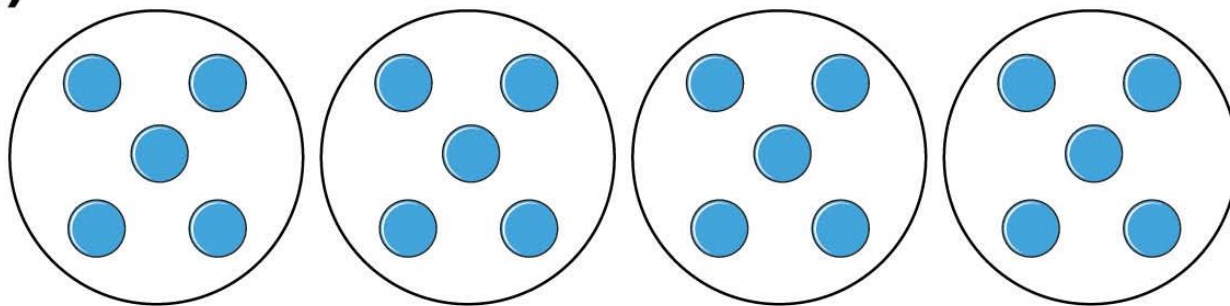
There are  counters altogether.

There are  equal groups of 2 counters.



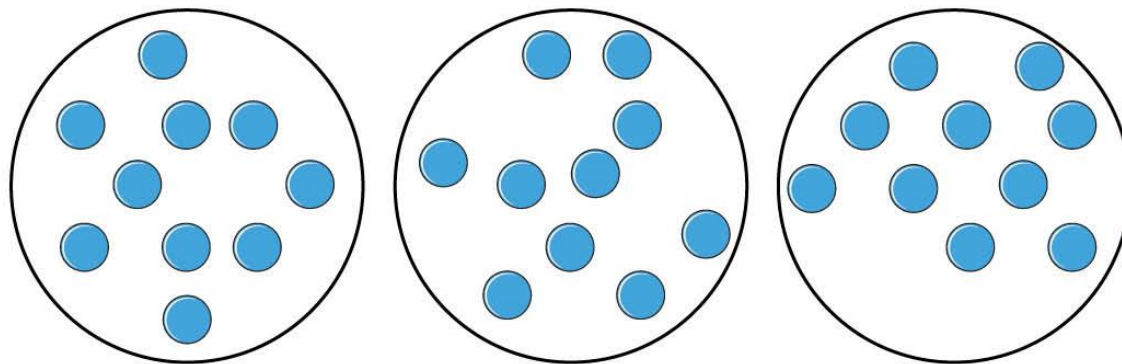
**3** Complete the sentences.

**a)**



There are  counters altogether.

There are  equal groups of  counters.

**3** b)

There are  counters altogether.

There are  equal groups of  counters.



**4** Use 30 counters.

**a)** How many equal groups of 2 can you make?

**b)** How many equal groups of 5 can you make?

**c)** How many equal groups of 10 can you make?

Talk about your answers