


# Halving Space Race

How fast can you halve?


Halve the numbers on the track and write the answers as you go.

Use a timer to see how long it takes you to finish the race!



The race track is a winding path with the following numbers and empty boxes for answers:

38	40	4	32	24	14	6	10	12	48	34	8	26	16	18
20	30	28	36	42	22	18								




START

# Halving Space Race Answers

How fast can you halve?

Halve the numbers on the track and write the answers as you go.

Use a timer to see how long it takes you to finish the race!



19 38 10 12 48 34  
40 5 6 24 17  
20 4 32 24 14 6 3 4 8  
2 16 12 7 13 26  
10 15 14 18 21 11 9 8 16  
20 30 28 36 42 22 18

START