


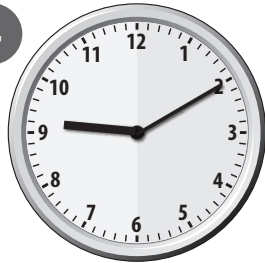






What time is it?

Write these times in digital format.

1		2		3		4	
	<input type="text"/>		<input type="text"/>		<input type="text"/>		<input type="text"/>

Draw the hands on each clock to match the time.

5		7	
	half past twelve		ten to six
6		8	
	quarter past ten		five to two

True or false?

9 Tom says there are 30 days in each of these months. ✓ if he is right, ✗ if he is wrong.

March		April		June		October	
-------	--	-------	--	------	--	---------	--

Shape detective

Write the name of each of these 3D shapes.

10 I have 6 faces.
I have 8 vertices (corners).
Each face is a rectangle.


12 I have 5 faces.
4 faces are the same.
I face is a square.

11 I have 3 faces.
I can roll along.
2 of my faces are circles.

13 I have 2 faces.
I have 1 vertex (corner).
I stand on 1 of my faces.

14 Explain to a grown-up how to recognise a prism.

Hmm, that's tricky!



I found this:
😊 Easy 🤔 Challenging 🙋 I needed help