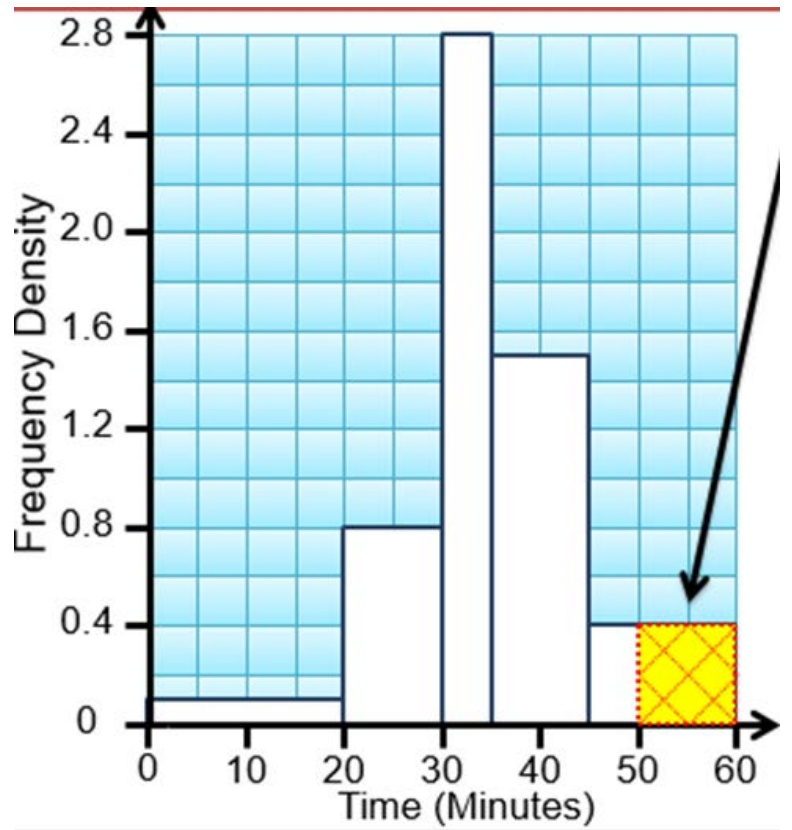
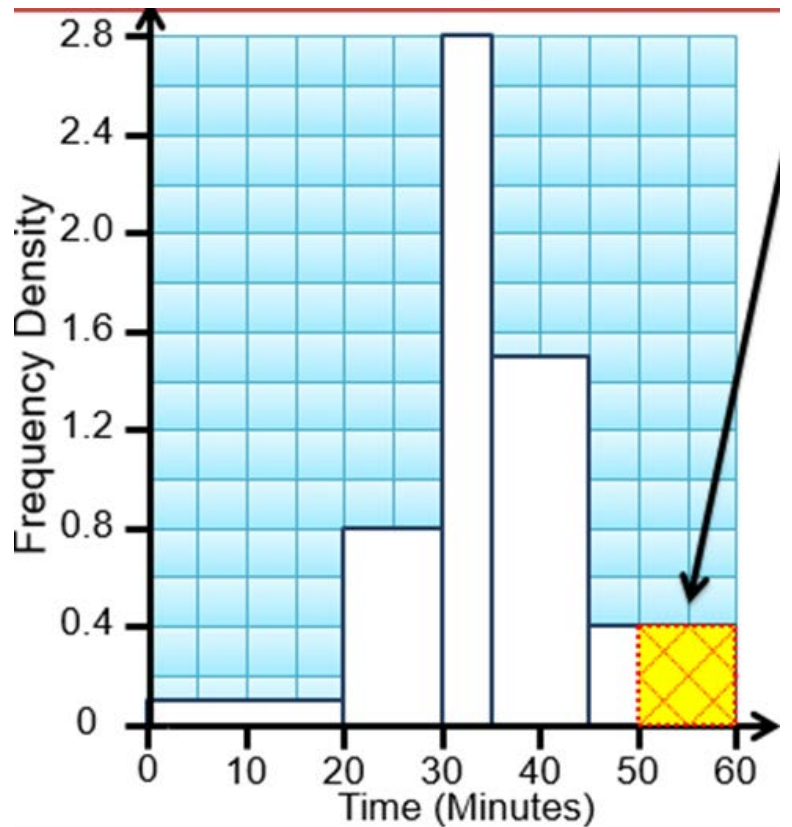


**Example:** The histogram shows the times a sample of students spent on the internet one evening. **(a)** Copy and complete the frequency table, **(b)** Estimate how many students spent longer than 50 minutes on the internet.



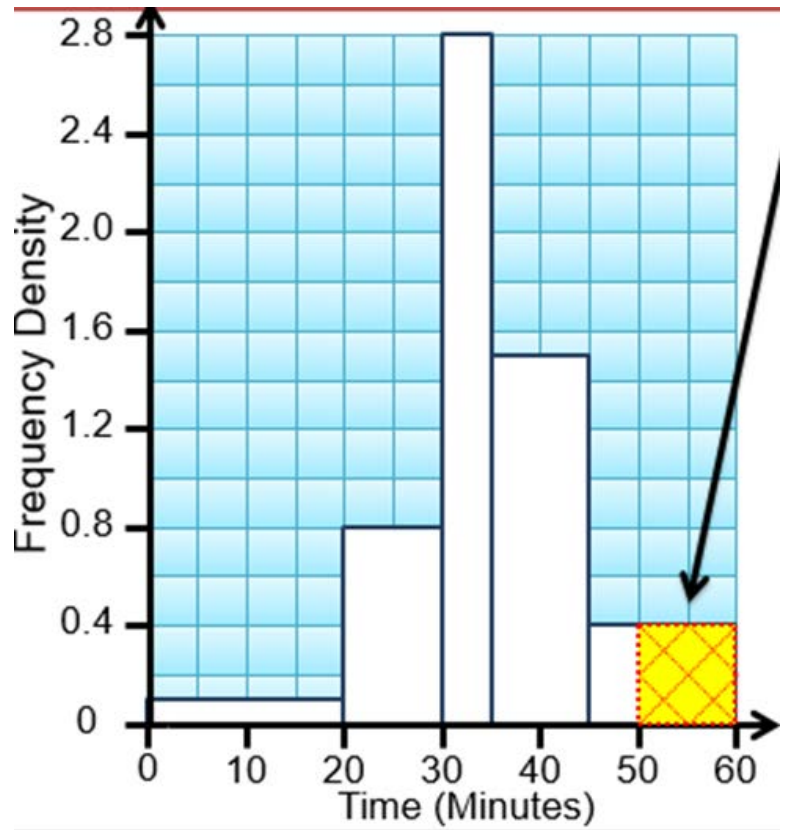
Height, h, cm	$100 \leq h < 130$	$130 \leq h < 140$	$140 \leq h < 150$	$150 \leq h < 160$	$160 \leq h < 180$
Frequency					

**Example:** The histogram shows the times a sample of students spent on the internet one evening. **(a)** Copy and complete the frequency table, **(b)** Estimate how many students spent longer than 50 minutes on the internet.



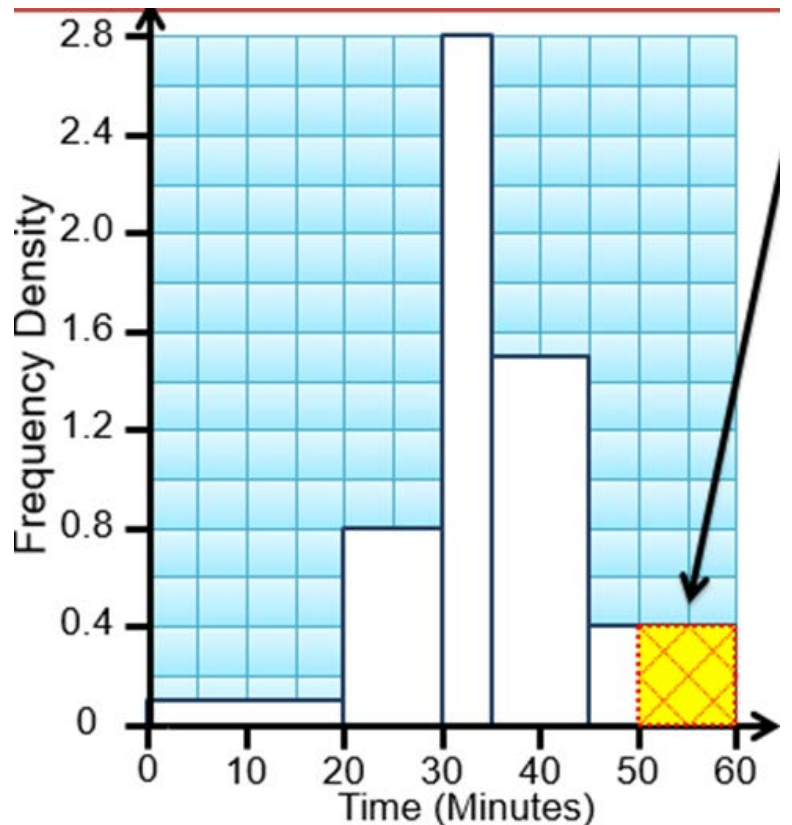
Height, h, cm	$100 \leq h < 130$	$130 \leq h < 140$	$140 \leq h < 150$	$150 \leq h < 160$	$160 \leq h < 180$
Frequency					

**Example:** The histogram shows the times a sample of students spent on the internet one evening. **(a)** Copy and complete the frequency table, **(b)** Estimate how many students spent longer than 50 minutes on the internet.



Height, h, cm	$100 \leq h < 130$	$130 \leq h < 140$	$140 \leq h < 150$	$150 \leq h < 160$	$160 \leq h < 180$
Frequency					

**Example:** The histogram shows the times a sample of students spent on the internet one evening. **(a)** Copy and complete the frequency table, **(b)** Estimate how many students spent longer than 50 minutes on the internet.



Height, h, cm	$100 \leq h < 130$	$130 \leq h < 140$	$140 \leq h < 150$	$150 \leq h < 160$	$160 \leq h < 180$
Frequency					