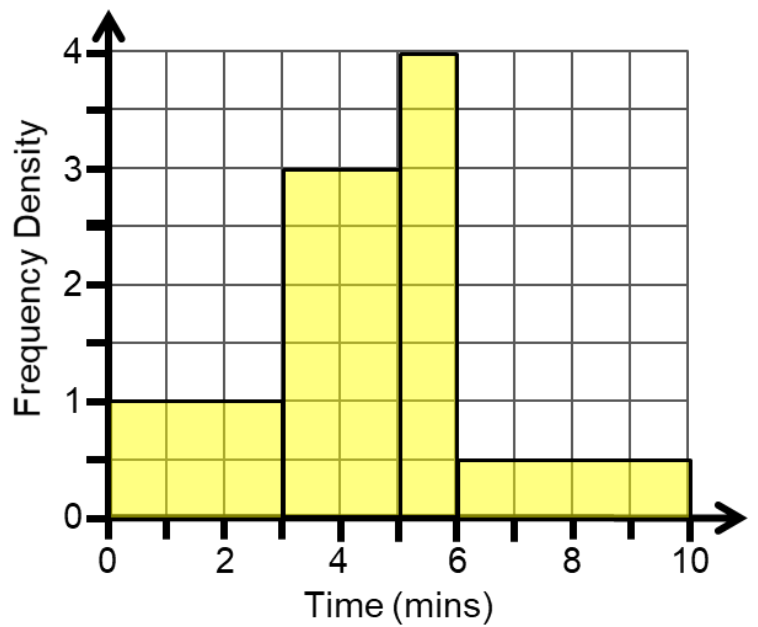
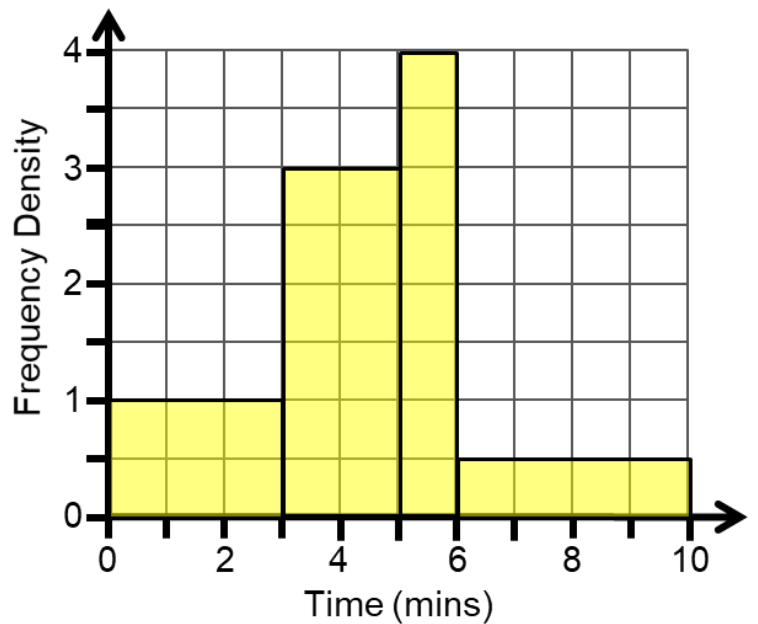


The Histogram shows the times a sample of students spent completing a maths challenge.



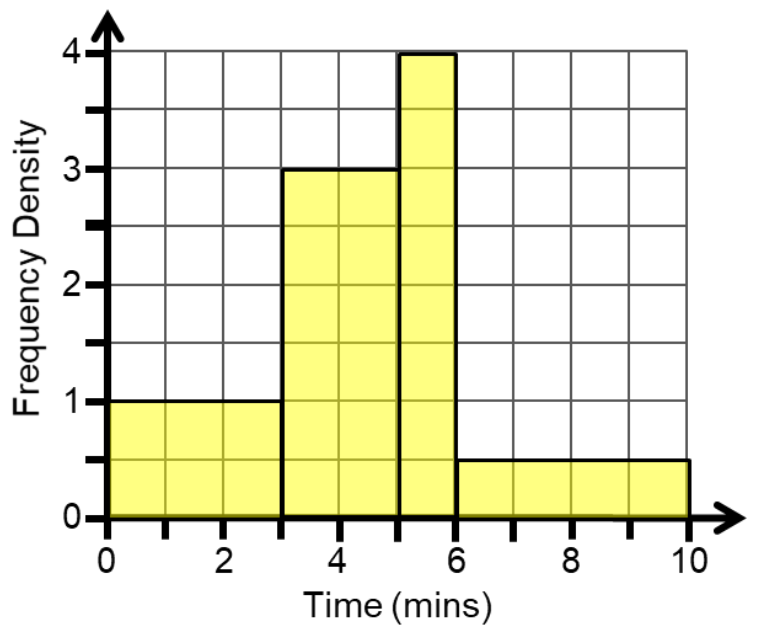
Time, t, mins	$0 \leq t < 3$	$3 \leq t < 5$	$5 \leq t < 6$	$6 \leq t < 10$
Frequency				

The Histogram shows the times a sample of students spent completing a maths challenge.



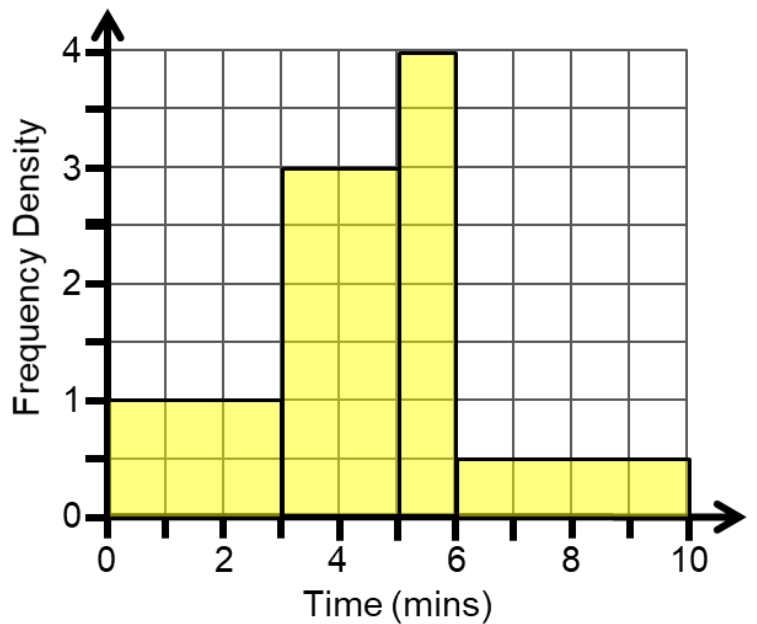
Time, t, mins	$0 \leq t < 3$	$3 \leq t < 5$	$5 \leq t < 6$	$6 \leq t < 10$
Frequency				

The Histogram shows the times a sample of students spent completing a maths challenge.



Time, t, mins	$0 \leq t < 3$	$3 \leq t < 5$	$5 \leq t < 6$	$6 \leq t < 10$
Frequency				

The Histogram shows the times a sample of students spent completing a maths challenge.



Time, t, mins	$0 \leq t < 3$	$3 \leq t < 5$	$5 \leq t < 6$	$6 \leq t < 10$
Frequency				