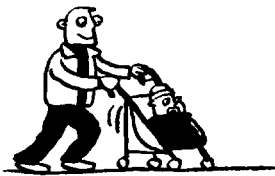
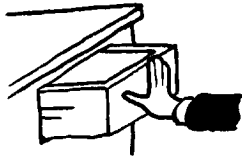

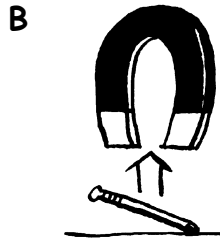




Types of Forces Worksheet 1

1 Which forces are pushes and which ones are pulls? Write the correct words in the spaces.



2 Look at the pictures below. Write the names of the forces next to the arrows.





3 Which pictures show non-contact forces? _____

4 Complete these sentences.

a A _____ is needed to start an object moving.

b A force can change the _____, _____ and _____ of an object.

c Nothing starts to move without a _____ being involved.

d Three forces which can act from a distance are _____, _____ and _____ forces.