

(NEW) answers

1. identify key health and safety legislation relevant to and used in a construction environment

2. state the key employer responsibilities under HASAWA

3. state the key employee responsibilities under HASAWA

4. state the roles and responsibilities of the HSE

5. identify other sources of relevant health and safety information

6. state when legislation would require the HSE to be informed

7. state why there is a requirement for enforcing stringent guidance in health and safety

8. state the importance of good housekeeping

9. state the purpose of risk assessments and method statements

10. list the major types of hazard in the workplace

11. state the importance of the correct storage of combustibles and chemicals on-site

12. List three items of PPE that are normally to be worn on-site at all times

13. Name two pieces of legislation that are concerned with PPE

14. List three possible consequences of not using PPE

15. Explain the difference between a dust mask and a respirator

16. list the three elements essential to creating a fire

17. state the ways in which a fire could spread and identify methods of fire prevention

Methods of fire prevention

18. state the actions to be taken on discovering a fire







19. state the correct fire evacuation procedures

20. state the different types of fire extinguishers and their correct uses

The following table can be used as a guide when selecting the correct type of equipment:

Contents:	Label or band colour	Suitable for use on the following classes of fire:
Water	RED	A
Foam	CREAM	A and B
Carbon dioxide	BLACK	B, C and E
Dry power	BLUE	A, B, C, D and E
Wet chemicals	YELLOW	A and F

Fire classification

 Class A: Wood, paper, textiles and any other carbonaceous materials	 Class D: Metals such as aluminium, magnesium and titanium
 Class B: Flammable gases such as petrol, oils, fats and paints	 Class E: Electrical equipment
 Class C: Flammable gases such as propane, butane and natural gas	 Class F: Cooking oils and fats

21. What is the purpose of a round, blue safety sign with a white picture?

22. Name and state the meaning for each of the following safety signs:



23. State why it is important to report all accidents and incidents

24. State why too many signs should not be placed together

25. Employers have a legal duty to advise employees of Health and Safety Law. State two forms this may take.

26. list the different signs and safety notices used in the workplace

Revision Quiz

- Q1. a - HASAWA – Health and Safety at Work Act
- Q2. c – Warn you of a specific hazard
- Q3. a - Lessons can be learned, which help to prevent future accidents
- Q4. c - Falls from a height
- Q5. d – Brown
- Q6. b - Provide employees with safe transportation to and from work
- Q7. a - A law or set of laws that must be followed by all
- Q8. a – COSHH (Control of Substances Hazardous to Health)
- Q9. a - Class A fires
- Q10. b - Detail a practical and safe way of undertaking a work task