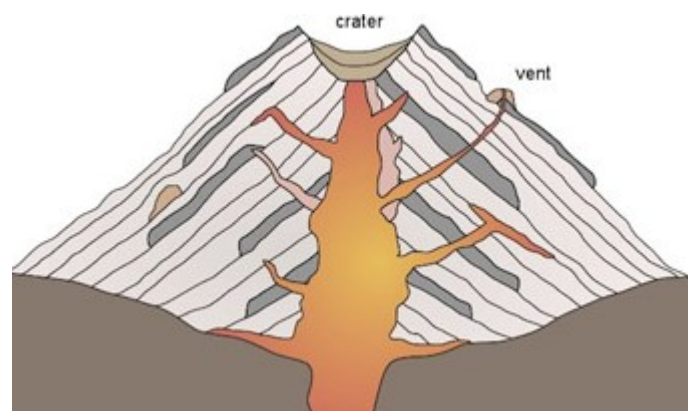
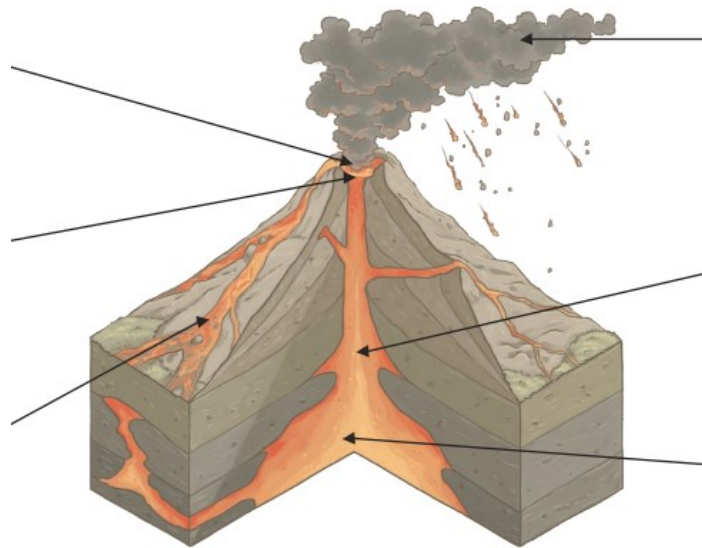


Active Planet topic—volcanoes

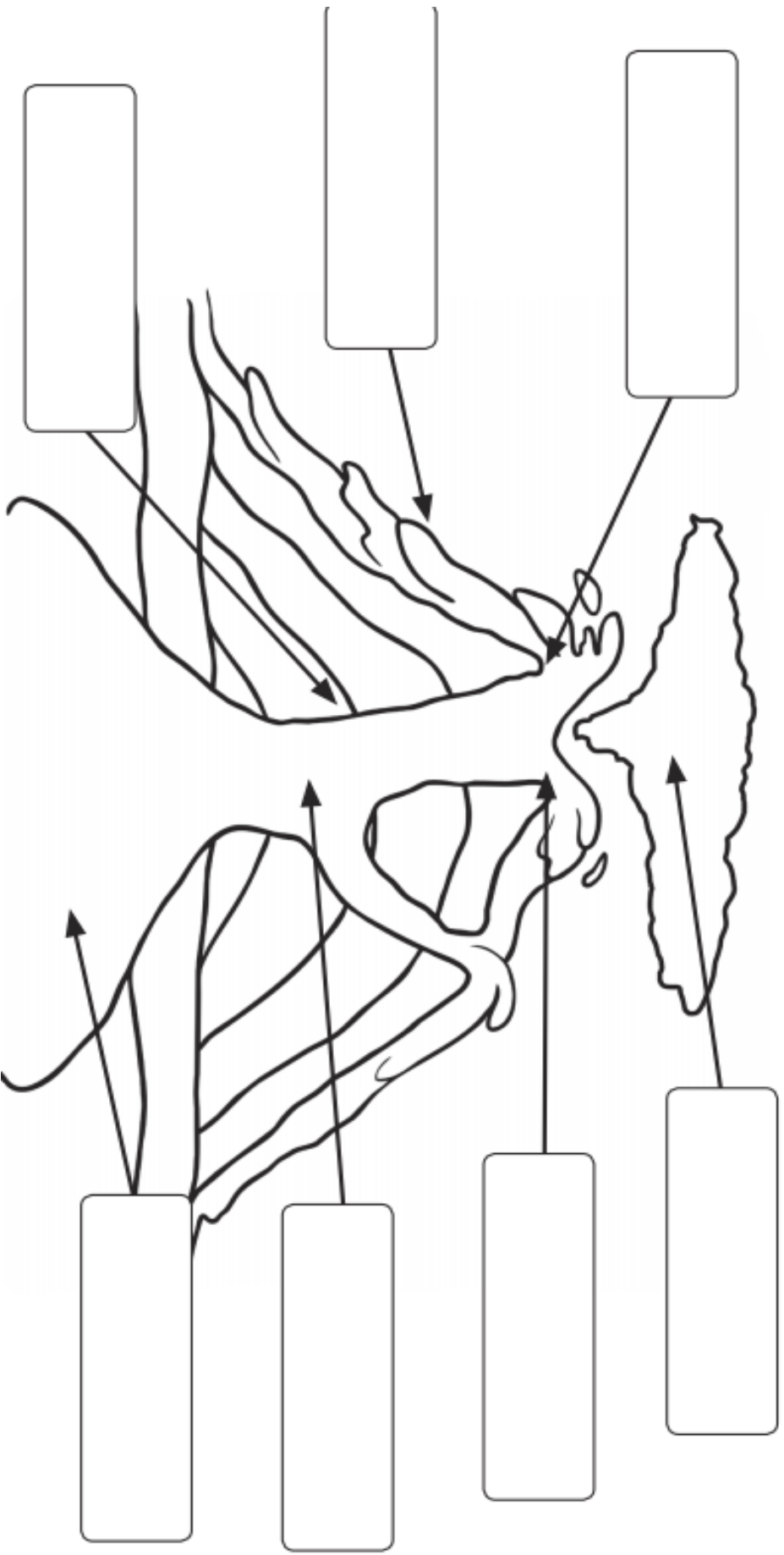
Your task for today is to:

- Label the main parts of a volcano. You can use the image in this pack and add labels, or you could draw your own cross-section (as if the volcano has been sliced down the middle like a cake) and add labels.
- Challenge— label a secondary vent on your diagram
- Fill in the chart (in this pack) about what each of the main parts of the volcano does. Need help?

You could watch the video again [Geography Lesson: What is a Volcano? | Twig - YouTube](#)



Can I identify and begin to understand the parts of a volcano?



Word bank

- main vent
- lava
- crater
- conduit
- magma chamber
- ash cloud
- layers of ash and solid lava

Can I identify and begin to understand the parts of a volcano?

	Definition
Ash cloud	<hr/> <hr/> <hr/> <hr/> <hr/> <hr/> <hr/> <hr/>
Crater	<hr/> <hr/> <hr/> <hr/> <hr/> <hr/> <hr/> <hr/>
Main vent	<hr/> <hr/> <hr/> <hr/> <hr/> <hr/> <hr/> <hr/>
Lava	<hr/> <hr/> <hr/> <hr/> <hr/> <hr/> <hr/> <hr/>

Can I identify and begin to understand the parts of a volcano?

	Definition
Magma	<hr/> <hr/> <hr/> <hr/>
Ash cloud	<hr/> <hr/> <hr/> <hr/>
Crater	<hr/> <hr/> <hr/> <hr/>
Main vent	<hr/> <hr/> <hr/> <hr/>
Secondary vent	<hr/> <hr/> <hr/> <hr/>
Lava	<hr/> <hr/> <hr/> <hr/>