

Key Vocabulary

UK Coins

amount

change

coin

combinations

convert

note

pence

penny

pounds

value



1p



2p



5p



10p



20p



50p



£1



£2

one penny coin two pence coin five pence coin ten pence coin twenty pence coin fifty pence coin one pound coin two pound coin

UK Notes



£5

five pound note



£10

ten pound note



£20

twenty pound note



£50

fifty pound note

Pounds and Pence

Convert Pounds and Pence



£3 and 25 pence

£52 and 13 pence



120 pence

100 pence is £1

120 pence is £1 and 20 pence.

Wednesday

Counting Money

Group B

IXL Sections to help: P.Money

Warm up—Count the money in pounds and pence.

Use $<$, $>$ or $=$ to compare the money.



Count the money.



Count the money.



Match the money to the correct total.



£25















£60



£10

Task 1—Use your help sheet if needed to count the value of the money. Read each question carefully!

<p>1a. Match the notes and coins to the correct amounts.</p> <p>A.  £5 and 21p</p> <p>B.  £4 and 20p</p> <p>★ VF</p>	<p>1b. Match the notes and coins to the correct amounts.</p> <p>A.  £2 and 5p</p> <p>B.  £5 and 51p</p> <p>★ VF</p>
<p>2a. Identify the total of the coins below.</p> <p>£ _____ and _____ p</p>  <p>★ VF</p>	<p>2b. Identify the total of the coins below.</p> <p>£ _____ and _____ p</p>  <p>★ VF</p>
<p>3a. Which has the greatest value?</p> <p>A. £8 and 54p</p> <p>B. </p> <p>C. £7 and 86p</p> <p>★ VF</p>	<p>3b. Which has the greatest value?</p> <p>A. </p> <p>B. £3 and 65p</p> <p>C. £2 and 44p</p> <p>★ VF</p>
<p>4a. Tick the odd one out.</p> <p>A.  <input type="checkbox"/></p> <p>B.  <input type="checkbox"/></p> <p>C. £5 and 21p <input type="checkbox"/></p> <p>★ VF</p>	<p>4b. Tick the odd one out.</p> <p>A.  <input type="checkbox"/></p> <p>B.  <input type="checkbox"/></p> <p>C. £5 and 55p <input type="checkbox"/></p> <p>★ VF</p>

Task 3— Using the coins, count how much money is in the jar.

How much money is in my jar?



Task 4— Using the help sheet, draw the coins that make the amount. Don't worry too much about your drawing!



36p



91p



59p